




මධ්‍යම පළාත් අධ්‍යාපන දෙපාර්තමේන්තුව

மத்திய மாகாண கல்வித் திணைக்களம்

Department of Education Central Province



Grade : 10

Year - End Examination - 2019

40 E I

Western Music

Time : 1 Hour

Note:

- ❖ Answer all the question.
- ❖ Select the most suitable answer.
- ❖ Index No:


1. Which of the following is correct way of grouping?



2. Which of the following is the smallest interval used in music?

- (i) Unison (ii) Tone (iii) Minor 2nd (iv) Semitone



3. Which of the following would be the key for G sharp minor?



4. Which of the following note has only other name?

- (i) F sharp (ii) B (iii) A flat (iv) C double sharp

5. Which of the following is a Secondary triad in A flat major?







6. The total number of Dotted Crotchet beats in the Tied note is







- (i) 4 (ii) 2 (iii) 1 (iv) 3

7. Which of the following is a Minor triad?

(i)  (ii)  (iii)  (iv) 

8. Which of the following is the Sub dominant, Second inversion triad of C minor?

(i)  (ii)  (iii)  (iv) 

9. Which of the following would include 'a Cadenza'?

- (i) Opera (ii) Oratorio (iii) Symphony (iv) Concerto

10. Which of the following is incorrect statement?

- (i) Robert Schumann wrote music for his own children.
 (ii) Schumann had a passionate love for his mother land.
 (iii) Liszt is recognized as the greatest pianist of his day.
 (iv) At the age 40, Mozart became totally deaf.





11. If a melody is composed for singing, which of the following is best **avoided**?

- (i) Dynamics (ii) Pause (iii) Leaps (iv) Phrases

12. Which of the following is least related to the others?

- (i) Choral Symphony (ii) Lied (iii) Oratorio (iv) Quartet

13. Which of these would be the Augmented 4th occurring in the scale of G minor?

(i)  (ii)  (iii)  (iv) 

14. Which of the following would be the correct chord indication to the given four-part harmony?




- (i) I I ii (ii) I iii Ivb (iii) I I b iib (iv) I Ib IV

15. Which of the following ways do Brass instruments vary their pitch?
 (i) By using slides and valves
 (ii) By using reeds and keys
 (iii) By using mutes
 (iv) By the use of pedals
16. In which musical do you find the song 'Edelweiss'?"
 (i) Mary Poppins (ii) Wizard of oz (iii) Evita (iv) Sound of music
17. Which of the following is the composition written by Debussy?
 (i) Clair de Lune (ii) Bolero (iii) Siegfried Idyll (iv) Hungarian Dance
18. The list which includes all instruments belong to the woodwind family are
 (i) Oboe, flute, Celest, piccolo, Cor Anglaise
 (ii) Oboe, flute, French horn, piccolo, Cor Anglaise
 (iii) Clarinet, Maracas, Oboe, piccolo, Cor Anglaise
 (iv) Oboe, flute, Double bassoon, piccolo, Cor Anglaise
19. Which of the following are the devices found in Variation form?
 (i) Ornamentation (ii) Change of rhythm (iii) Change of key (iv) All of them
20. A pop song written and composed by John Lennon and Paul McCartney is
 (i) Yesterday (ii) Love changes (iii) Flow gently (iv) You raise me up
21. Which of the following Pedals of the piano lifts all the dampers away from the strings and let the strings that have been struck to continue vibrating?
 (i) Sostenuito pedal (ii) Una Corda pedal (iii) Damper pedal (iv) Legato pedal
22. Which of the following is the frequency of the given note?



- (i) 512vps (ii) 880vps (iii) 440vps (iv) 220vps
23. A passage or a section which is rounds off a piece or a movement is
 (i) Coda (ii) Episode (iii) A phrase (iv) Theme
24. Which composer is built a theatre to perform his own Operas?
 (i) Mozart (ii) Brahms (iii) Verdi (iv) Wagner
25. How many strings would a standard Acoustic Guitar have?
 (i) 4 (ii) 5 (iii) 6 (iv) 7
26. Which of the following is least related to the others?
 (i) Minuet (ii) Gigue (iii) Allemande (iv) Sarabande
27. Which of the following roman numeral is correct according to the given key signature?




Ivb



iib



iiic



vic

28. Which of these is a song of Nadagam?

(i) Wasana dineki

(ii) Premayen mana ranjitha we

(iii) DannaWan hung

(iv) Ennawe mea mala kolam

29. In which period was 'Programme music' popular?

(i) Baroque period

(ii) Classical period

(iii) Romantic period

(iv) Modern period

30. Which following would be heard when the given extract is played in "Oboe"?



31. Which of the following illustrates the correct pattern of notes when the given ornament is played?



32. Which of the following work demonstrate "the style of a March"?

(i) Alla turca

(ii) Aida

(iii) 1812

(iv) Romance from Concerto in D

33. In which key would this be the Tonic triad?



(i) E minor

(ii) C minor

(iii) G minor

(iv) C major

34. In Ternary form if the Principal theme is in G major, which key would be ending the section?

(i) E minor

(ii) G major

(iii) D major

(iv) none of the above

35. Which of the following describes an Oratorio?

(i) An Instrumental composition.

(ii) A dramatic composition with music and drama.

(iii) A musical story with acting and singing.

(iv) A biblical story set to music and voice.

36. The false statement would be
- (i) The audience e applause after the movement of a symphony.
 - (ii) The Concert master is the leader of the orchestra.
 - (iii) The orchestra is tuned to 2nd space "A" in Treble clef played by the Oboe.
 - (iv) The request of a composition in the orchestral performance is known as 'Encore'.
37. Which of the following is a Light song?
- (i) Suwada padma olu adi....
 - (ii) Gambeera thedathi..
 - (iii) Ase madura jeevanaye geetha
 - (iv) Wasana dineki....
38. Which of the following instrument is known as the "Clown of the orchestra"?
- (i) Piccolo
 - (ii) Bassoon
 - (iii) Double bassoon
 - (iv) Cor Anglaise
39. Which of the following is correct group of instruments?
- (i) Gong, floor tom, Crash cymbal, Ride cymbal
 - (ii) Hi- hat, Ride symbol, Tom-toms, Timpani
 - (iii) Hi hat, cymbal, Snare drum, Bass drum
 - (iv) Floor tom, Tom-tom, Tambourine, Hi hat
40. Which of the following is composition is written in Rondo form?
- (i) Handel - Harmonious Blacksmith
 - (ii) Bach -Prelude and Fugue no 1
 - (iii) Beethoven - Minuet in G
 - (iv) Beethoven - Fur Elise



Grade : 10

Year - End Examination - 2019

40 E II

Western Music

Time : 2 Hours

Note:

❖ Answer five questions including part I and selecting two questions from each of the parts II and III on this paper itself. (12 marks for each)

❖ Index No:

PART I

1) The questions are based on the following extract.



Bird-catcher's Song

Allegretto

from Magic Flute

Wolfgang Amadeus Mozart

1. Name the key of the extract.
.....
2. Describe the change of key in bar 16.
.....
3. What type of work is Magic Flute?
.....
4. Write the nationality of the composer.
.....
5. Write the term 'Allegretto' to indicate the tempo of the extract.
6. Write the chord indication of the bracketed chord A.
.....
7. Name 2 articulation marks found in the piece.
i. ii.
8. Is there "an Anacrusis" at the beginning, yes/no
.....
9. Name the Cadence at the end of the piece.
.....
10. Write bar 7, in Double the value.




PART II

Answer any two questions

- 2) Write the scales as required. (4 marks each)


- (i) Following is a harmonic minor scale ascending which starts from the Sub Mediant in Minims. Complete the scale and mark semitones with slurs.




- (ii) Write the **F Melodic minor** scale descending in Crotchets. Prefix the key signature and mark semitones with slurs.




- (iii) Compose four bar melody using the notes of E minor, in Simple duple time.



- 3) (i) transpose the following tune down a major 2nd to the given clef. (3 marks)



- (ii) Insert accidentals to make this melody in F sharp minor. (3 marks)



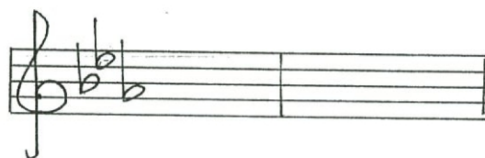

(iii) Write the words as it should be sung under the given notes. (3 marks)

'Snow drops and Daffodils, butterflies and bees'



.....

4) (i) Complete the following cadences by adding the necessary parts. (6 marks)



V

I

I

V

(ii) Write the triads in the bass stave shown by the Roman numerals. (6 marks)



..... I ii^b .. V^b .. ii^b .. V .. I ..

PART III
Answer any two questions

5) (i) Write the following four parts for closed open score for S.A.T.B. (6 marks)



(ii) Briefly describe two of the following. (6 marks)

- (a) Opera
- (b) Symphony
- (c) Suite

.....

.....

.....

Handwriting practice lines consisting of 15 sets of three horizontal dotted lines on a solid baseline.


6)(i) Write the following ornaments in full as they should be played. (6 marks)

Handwritten musical notation for three ornaments. The first is a mordent on a quarter note G4 in 3/4 time. The second is a grace note on a quarter note G3 in 2/4 time. The third is a mordent on a quarter note G4 in 2/4 time.

Empty musical staff line for writing the first ornament in full.

Empty musical staff line for writing the second ornament in full.

(ii) Fill these bars with rests properly groped. (6 marks)



7) (i) Briefly describe one of the following. (6 marks)

- String Instruments
- Brass wind instruments
- Percussion Instruments

This image shows a full page of blank handwriting practice paper. It features multiple sets of horizontal lines. Each set consists of a solid top line, a dashed middle line, and a solid bottom line, providing a guide for letter height and placement. The paper is otherwise empty, with no text or markings.

(ii) Briefly describe two of the following. (6 marks)

(a) Ludwig Van Beethoven

(b) Claude Debussy

(c) Frederic Chopin