

Grade 7

Year End Evaluation 2019

41

E

I, II

Western Music

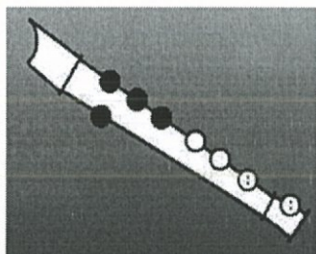
2 hours

Note:

- ❖ Answer all the question.
- ❖ Select the most suitable answer. (1x 20 marks)
- ❖ Index No:

1. Which of the following is sung during Christmas?
(i) Carols (ii) Bhakthi gee (iii) Bajans (iv) Jayamangala gatha
2. Which would be a singing bird?
(i) Crow (ii) Peacock (iii) Barbet (iv) Owl
3. A musical sentence known as
(i) Slur (ii) Phrase (iii) Stavet (iv) Tone
4. Which of the following form has two parts?
(i) Phrase (ii) Ternary (iii) Double bar (iv) Binary
5. Which would be a Baroque period composer?
(i) Beethoven (ii) Mozart (iii) Bach (iv) Elvis Presley
6. Which of the following is the definite pitched percussion instrument?
(i) Triangle (ii) Xylophone (iii) Snare drum (iv) Clappers
7. A sharp is used to
(i) Raise a note (ii) Lower a note (iii) Lower a note (iv) Lower a tone
8. Which of the following has the same degree of the scale?
(i) Mi - Pa (ii) Doh- Supertonic (iii) Soh- Dominant (iv) Fah - Ri
9. Which of the following time signature is suitable when there is three crotchet beats in the bar?
(i) $\frac{2}{4}$ (ii) $\frac{4}{8}$ (iii) $\frac{2}{2}$ (iv) $\frac{3}{4}$
10. How many semitones are there between C- E?
(i) 4 (ii) 3 (iii) 2 (iv) 1
11. What is an interval?
(i) The height or depth of the sound (ii) A ladder of musical notes
(iii) Distance between two notes (iv) Quality of the sound

12. Which of the following country has the origin of Kaffiringha?
 (i) Portugal (ii) England (iii) Holland (iv) Sri Lanka
13. A performance by three people is called a
 (i) Solo (ii) Trio (iii) Duet (iv) Quartet
14. Which of the following is equal to two semibreves?
 (i) Semi quaver (ii) Crotchet (iii) Breve (iv) Quaver
15. What is the meaning of "Mezzo forte"?
 (i) Moderately loud (ii) Moderately soft (iii) Very soft (iv) Loud
16. Which major scale has two flats?
 (i) G major (ii) F major (iii) D major (iv) B flat major
17. The Trumpet belongs to
 (i) Percussion section (ii) Brass wind section
 (iii) String section (iv) Wood wind section
18. Which of the following Sri Lankan drum accompanies Kandyan dancing?
 (i) Geta beraya (ii) Yak beraya (iii) Daula (iv) Udekkiya
19. The given note in the recorder is



- (i) C (ii) B (iii) A (iv) G
20. Which of the following is the same note as G flat?
 (i) A sharp (ii) F sharp (iii) A (iv) E sharp

PART II

Answer the first question and two others.

1. Answer the following questions based on the given extract. (10 marks)

www.flutetunes.com


London Bridge is Falling Down

Traditional English


$\text{♩} = 92$

5

- i. Describe the time signature.
- ii. What is the Key signature of this musical extract?
- iii. How many bars in the musical extract?
- iv. Name the rest in the given melody.
- v. Circle the highest pitched note in the melody.
- vi. Name an instrument on which this melody could be played.
- vii. Write the number of semitones in the bracket in bar 7.
- viii. Name a song used for rounds that you know.
- ix. Write the letter name marked with an arrow.
- x. Transpose the first bar octave lower in the same clef.




2. i. Write G major scale ascending in Bass clef with the key signature. Mark the semitones with slurs. (4 marks)



ii. Build the given Tonic triads using the correct key signature. (2 marks)

F major




C major



iii. Put the correct time signature. (4 marks)



3. i. Transpose the given melody **octave higher** to the **same clef**. (5 marks)



ii. Write a short description on Binary form. (5 marks)

.....

.....

.....

.....

.....

.....

.....

4. i. Name the following instruments. (4 marks)



.....

ii. Fill the following grid. (4 marks)

Composer	Nationality	work
Bach
Handel

iii. Name the main four periods in the history of music. (2 marks)

a, b.

c. d.