



මධ්‍යම පළාත් අධ්‍යාපන දෙපාර්තමේන්තුව  
மத்திய மாகாணகல்வித் திணைக்களம்  
CENTRAL PROVINCE DEPARTMENT OF EDUCATION - CENTRAL PROVINCE

මධ්‍යම පළාත් අධ්‍යාපන දෙපාර්තමේන්තුව  
மத்திய மாகாணகல்வித் திணைக்களம்  
CENTRAL PROVINCE DEPARTMENT OF EDUCATION - CENTRAL PROVINCE



Grade 6

Year End Evaluation 2019

41

E

I, II

Western Music

2 hours

Note:

- ❖ Answer all the question.
- ❖ Select the most suitable answer. (1x 20 marks)
- ❖ Index No: .....

1. How many sections are there in an orchestra?

- a) 3                                      b) 4                                      c) 5                                      d) 2

2. How many notes are there in a scale?

- (a) 7                                      (b) 5                                      (c) 8                                      (d) 6


3. Another name for Geraberaya?

- (a) Pahatharataberaya                                      (b) Udarataberaya  
(c) Thammattama                                      (d) Yak beraya

4. Double bar lines are used,


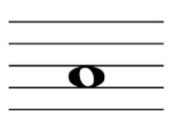


- (a) At the end of the music                                      (b) At the middle of the music  
(c) At the beginning of the music                                      (d) None of the above

5. Name of this rest



- (a) Quaver rest                                      (b) Crotchet rest  
(c) Minim rest                                      (d) Semibreve rest

6. Two minims equal to a

- (a)                                       (b)                                       (c)                                       (d) 

7. The bass clef is also known as,

- (a) G clef                                      (b) C clef                                      (c) F clef                                      (d) B clef

8. Where do you write the middle C in the Bass clef?

- (a) above the stave                                      (b) Below the stave  
(b) In a space                                      (d) On a line

9. What is 2 beat time called?

- (a) Duple (b) Triple  
(c) Quadruple (d) None of the above

10. D is the ..... note of the ascending scale of C major.

- (a) First (b) Seventh (c) Second (d) Third

**Match A to B**

**A**

**B**

- |     |           |                 |
|-----|-----------|-----------------|
| 11. | Violin    | Percussion band |
| 12. | Bass Drum | Perahara        |
| 13. | Horanewa  | Orchestra       |

**Fill the blanks, using the following words**

14. A waltz is in ..... time
15. Semibreve has ..... counts
16. There are ..... beats in triple time.

(Three / four / Triple)

**Match the words to the notes**

17. B E D



18. F A C E



19. A G E



20. E D G E



### Part 11

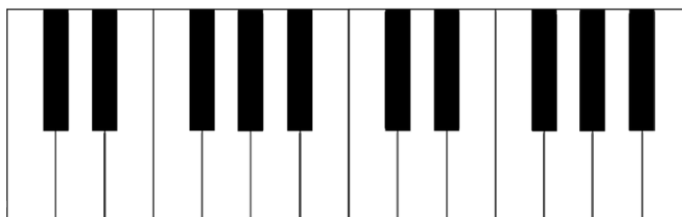
*Answer question no. 01 and 02 other questions. (30 marks)*

- (1) Answer the following questions using the melody below.

\*



- (1) What is the time signature of this melody? .....
- (2) How many bars are there in all? .....
- (3) How many middle C notes are in all? .....
- (4) Circle all the minim notes.
- (5) Put a crotchet rest under the asterisk mark.
- (6) Name all the letter names of the notes in bar 6 .....
- (7) Name 2 Key board instruments which can play this melody.  
.....  
.....
- (8) Mark all the notes in bar 7 on the key board.



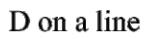
(10 marks)

(2) (i)



(3 marks)

(ii) Write these notes as **Minims**



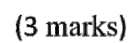
## C in a space

(4 marks)







(iii) Solve this crossword puzzle by using the letter names of the notes.



3



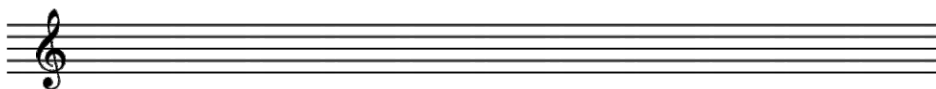
(3) (i) Write these notes and rests.

	Note	Rest
a) Crotchet		
b) Minim		
c) Semibreve		


(3 marks)

(ii) Write these scales.

a) Write C major scale ascending with Semibreves

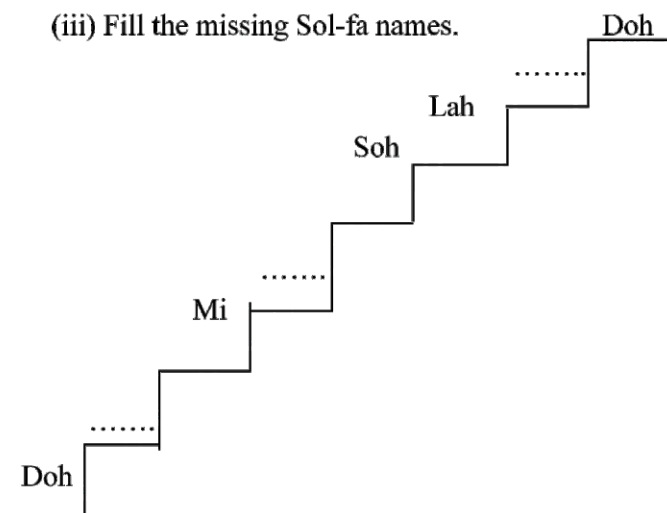


b) Write C major scale descending with semibreves.



(4 marks)

(iii) Fill the missing Sol-fa names.



(3 marks)

(4) a) Name the sections of the orchestra

.....



.....

.....

.....

(4 marks)

b) Identify the following instruments.



.....

.....

.....

(3 marks)

d) Write 3 musical sounds.

.....

.....

.....

(3 marks)