



PROVINCIAL DEPARTMENT OF EDUCATION-NORTH WESTERN PROVINCE

FIRST TERM TEST 2018

Grade 09

GEOGRAPHY

Two Hours

Name / Index No. :

Part - I

- Answer all the questions

- Write the most suitable answer on the given space for question no. 01 to 05.

01 is located to the east of the continent of Asia.
(Indian ocean / continent of Africa / Pasific ocean)

02 The nothern boundary of the continent of Asia is..... (80° / 180° / 25°)

03 China and which have the highest population in the world belong to the continent of Asia. (Indunesia / India / Pakistan)

04 river which is in Asia flows to an internal sea.
(Howangho / Ural / Ganges)

05 The average temperature is more than 18 °C is in the zone.
(Tropical / Temperate / Frigid)

- If the following statements are correct put (✓) if not put (✗) for question no. 6 to 10.

06 The temperate climatic zone extends between 23½° to 66½° south latitudes. ()

07 The deepest fresh water lake is Bolkash lake in Asia. ()

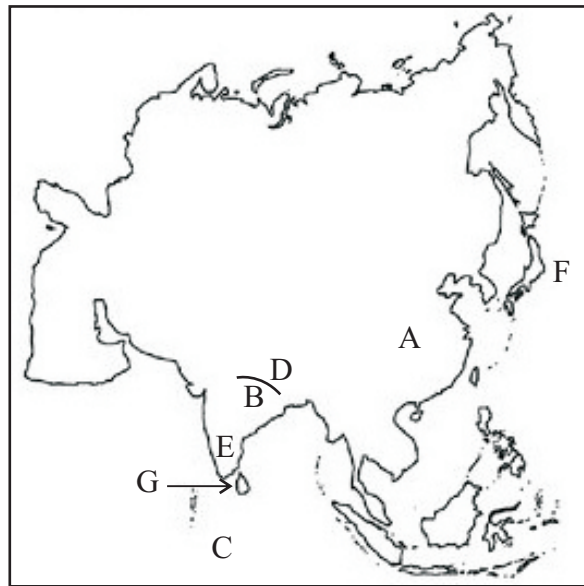
08 The trees in a shape of a cone can be seen in Temperate zone. ()

09 Mesapothemian civilization was created in the Euphrates and Tigris region. ()

10 The human race, Mongoloid people live in Arabian Countries. ()

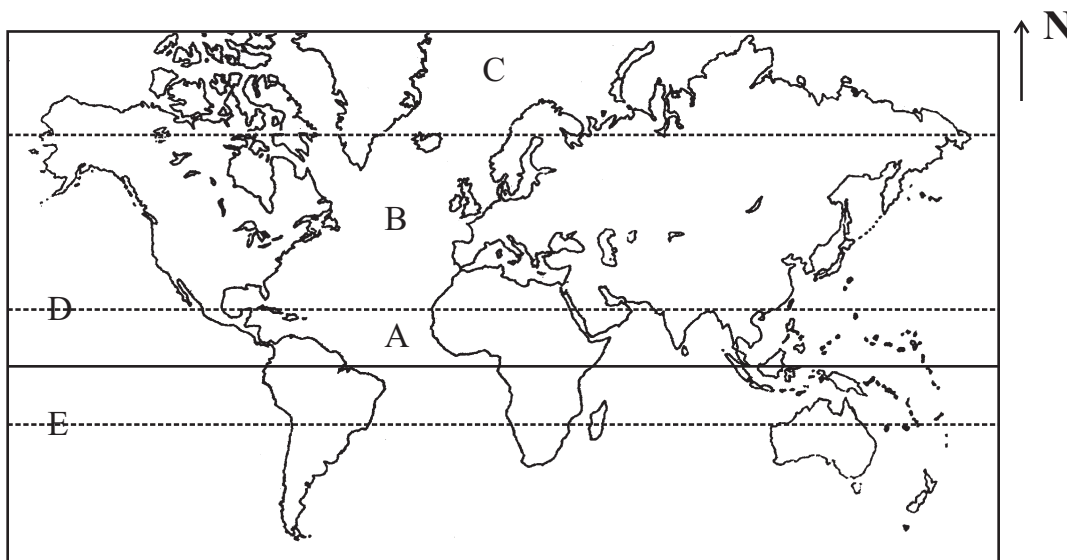
- Answer 5 questions including the first question.

01



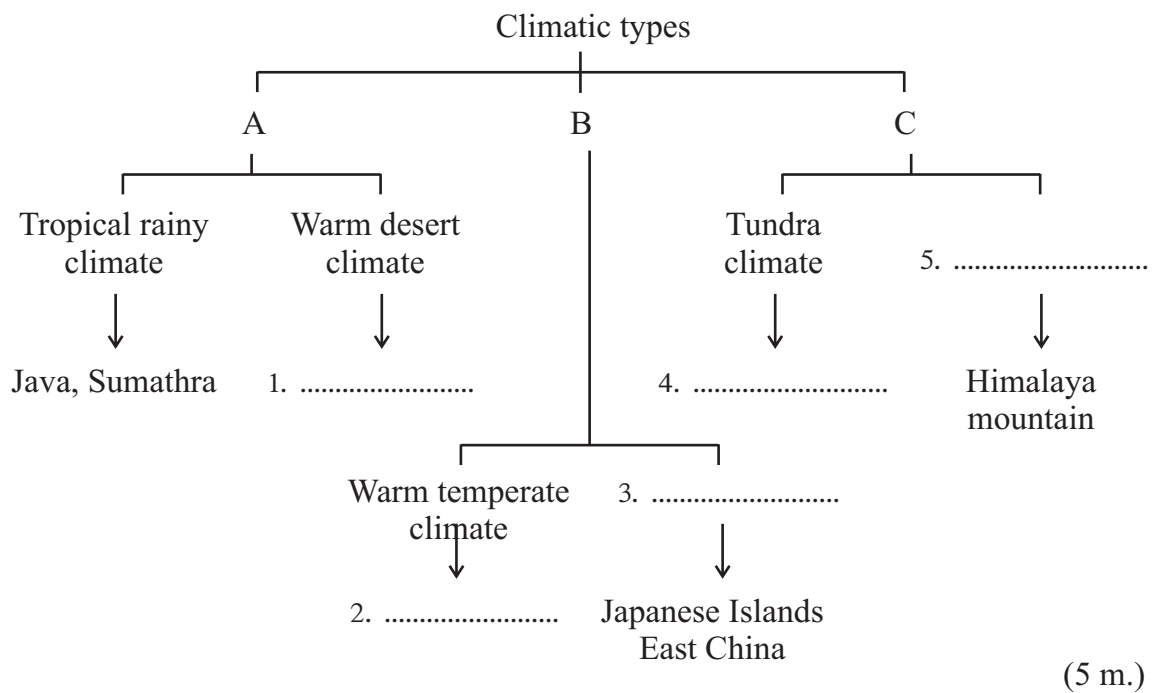
- (1) According to the above map of Asia, name the country shown by letter A and the mountain range shown by letter B. (3 m.)
- (2) Name the ocean shown by letter C and the plateau shown by letter D. (3 m.)
- (3) Name the country shown by letter E and write the climatic zone that belong to it. (2 m.)
- (4) Name the Islands shown by letter F and write 2 specific features of it. (4 m.)
- (5) Write the country shown by letter G and write 2 features of its location. (4 m.)

02







- (1) Name the climatic zones shown by letters A, B, C. (3 m.)
- (2) Name the lines shown by letters D and E which are the boundaries of the A zone. (2 m.)
- (3) Write 3 climatic features of the region shown by letter 'C'. (3 m.)

- 03 (1) Following are the features of Vegetation and wildlife. Write the vegetation zone that they are belonged to.
1. Kinds of epiphytic are abundant.
 2. Leaves are in a shape of needles.
 3. Sable, Mink are animal species that can be seen there.
 4. Falling of leaves from trees annually.
 5. Trees like Oak, Mulberry are abundant.
 6. High bio diversity. (6 m.)
- (2) Complete the following chart using the climatic types of the continent of Asia.



- 04 (1) Following pictures shows some human races live in the Asian region. Name those human races and write one each country that they live in.

	A	B	C	D
				
Human race	1.....	2.....	3.....	4.....
Living country	5.....	6.....	7.....	8.....

- (8 m.)
- (2) Write 2 sparsely populated areas and 1 densely populated area in Asian region. (3 m.)

05 (1) Complete the following grid which has features of two countries in the Asian region.

	Japan	Pakistan
1. Main products	1. 2.	3. 4.
2. Main economic activity	5.	6.
3. Colser country	7.	8.

(8 m.)

(2) Write 3 service industries that are conducted by the country Dubai.

(3 m.)

06 (1) Name the relief zones shown by letters A, B and C according to the physical landscape of Sri Lanka.

(2) Write the zones according to the height of the zones.

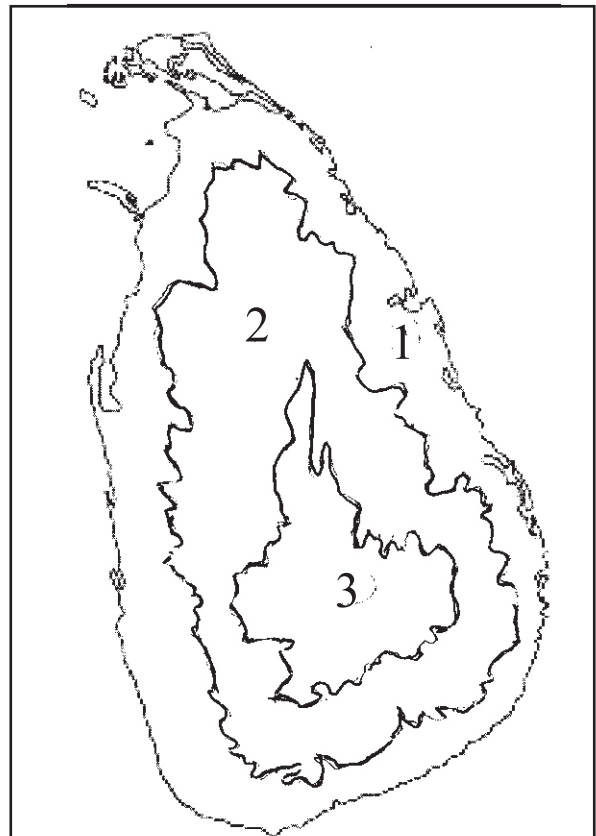
A from m to m

B from m to m

C from m to m

(6 m.)

(3) Write 2 relief features of the A zone. (2 m.)



Answer Paper - Part - I

- (01) Pacific (02) 180° (03) India (04) Ural (05) Tropical
 (06) ✓ (07) ✗ (08) ✗ (09) ✓ (10) ✗ (11) 2 (12) 3 (13) 4
 (14) 1 (15) 3 (16) Japan (17) 10 (18) 6 (19) Toyota / Nissan
 (20) Durability (2 x 20 = 40)

Part - II

- 01 (1) A - China B - Himalaya (2 m.)
 (2) C - Indian D - Tibef (2 m.)
 (3) E - India / Tropical climate (4 m.)
 (4) Japanese Islands, / Industrial country, Automobile industry etc.
 (5) Sri Lanka - North - India / in the Asian continent / in the Indian ocean / Island etc. (4 m.)
- 02 (1) A - Tropical B - Temperate C - Frigid (3 m.)
 (2) Tropic of cancer - D Tropic of capricorn - E (2 m.)
 (3) C - Less temperature / falling snow / raining with snow etc., (3 m.)
 (4) B - Give marks for marking countries. (3 m.)
- 03 (1) 1. Tropical rain forest 2. Coniferous forest 3. Coniferous forest
 4. Deciduous forest 5. Deciduous forest
 6. Tropical rain forest (6 m.)
 (2) 1. Tar desert, Middle east countries 2. Meditarenian areas
 3. Wet temperate climate 4. Saiberia
 5. Mountainous climate (5 m.)

04 (1)

	A	B	C	D
Ethnic group	Mongoloid	Caucasorid	Mongoloid	Caucasorid
country	China	India	Korea	Sri Lanka

(8 m.)

Give marks for other relavent countries also.

- (2) Give marks for writing densely and sparsely populated areas.
- 05 (1) Give marks for filling the grid according to the relavent facts. (8 m.)
 (2) Give marks for writing service industries. (3 m.)
- 06 (1) A Coastal plain B Intermediate plain C Central hills (3 m.)
 (2) A from 0 m to 30 m B from 30 m to 300 m C over 300 m (6 m.)
 (3) marshy lands, bays, lagoons, points etc., (2 m.)
- 07 Down
 (1) Irawadl (2) Ganges (3) Iran (4) China (5) Miyanmar
 (6) India
 Across
 (3) Industries (7) Japan (8) Euphrates (9) agricultural (10) Pakistan

(11 m.)