



ZONAL EDUCATION OFFICE, VADAMARADCHY

Third Term Examination - 2019

Information & Communication Technolghy

Grade: 6

Time: 2 Hours

Part I

Underline the correct answer.

- 1) What is the expansion of CPU?
 1. Computer Processing Unit
 2. Common Processing Unit;
 3. Central Processing Unit
 4. Control Processing Unit
- 2) Which of the following are input devices?
 1. Keyboard, Mouse, Speaker
 2. Printer, CD, Speaker
 3. Keyboard, Mouse, Micro Phone
 4. Monitor, Scanner, Micro Phone
- 3) What is the advantage of using computer for the office activity?
 1. Not Tired
 2. Reduce the human resources
 3. Low cost
 4. All are correct
- 4) How to call the conversion process from the given instruction to information?
 1. Input
 2. Process
 3. Storage
 4. Output
- 5) Which pictures are the correct for using computer properly?



A



B



C



D



E


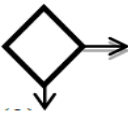
1. B,D only

2. B,C only

3. A,B only

4. B,D ,E only

- 6) Which one is an example of search engine?
 1. Ms word
 2. Bing
 3. Google chrome
 4. Mozilla Firebox
- 7) Which is / are characteristic of computer?
 - A. Speed
 - B. Reliability
 - C. Intelligence
 1. A, B only
 2. A only
 3. B, C only
 4. All A,B and C
- 8) Which one is an example of Application software?
 1. Windows
 2. Operating System
 3. Hardware
 4. Microsoft Access

- 9) Which tool is used to create a new document in Graphical Software?
 1. Save 2. Close 3. New 4. Open
- 10) In Graphical Software  symbol is used for?
 1. Save 2. Close 3. New 4. Open
- 11) What is the file extension of First.ppt?
 1. First 2. First.ppt 3. ppt 4. Docx
- 12) Which one is an example of Operating System?
 1. Library System Software 2. Word Processing Software
 3. Linux 4. MsExcel
- 13) Which software is used to create a document?
 1. Ms Word 2. Ms Excel 3. Ms Power point 4. Ms Paint
- 14) Which of the following is not a storage device?
 1. Magnetic tape 2. DVD 3. Blue Ray 4. Multimedia Projector
- 15) Which of the following is special purpose software?
 1. Library System Software 2. Word Processing Software 3. Ms Excel
 4. Ms Access
- 16) Which keys are used to move the cursor up and down and from right to left?
 1. Arrow keys 2. Spacebar key
 3. Shift keys 4. Backspace key
- 17) What is the meaning of  symbol used in flowchart?
 1. Start 2. Output 3. Process 4. Decision
- 18) Which one is an example for communication devices?
 1. Magnetic Tape 2. Printer 3. Blue Ray 4. Router
- 19) What is the short cut key for close ?
 1. Ctrl + C 2. Ctrl + X 3. Ctrl + W 4. Ctrl + V
- 20) Which one is not an example for web browsers?
 1. Google chrome 2. Internet Explorer 3. Mozilla Firebox 4. Yahoo

20 X 2 = 40 Marks

Part II

Answer first question and any other two questions.

01) Answer the following questions.

1) Write the appropriate devices in the appropriate column of the classification table

Monitor, Keyboard, Hard Disk, Scanner, Router, Speaker, CD, Switch, Web camera, Multimedia projector

Input Devices	Output Devices	Storage Devices	Communication Devices

(10x0.5=5 Marks)

2) Write the shortcut key of the following?

- a. Copy a file (3Marks)
- b. Paste a file
- c. Open a file

3) Given some tools in Paint software .write the correct face label in given functions.



P



Q

Crop

R



S




T

- 1. Type the text
- 2. Cut the unnecessary part of the image
- 3. Erase writings and drawings
- 4. Draw a line
- 5. Easy to coloring closed part or shape

(5x1=5 marks;)

4) Write the names of the parts of the computer devices shown in the following figure.



- A:.....
- B:.....
- C:.....
- D:.....
- E:.....
- F:.....
- G:.....

(7x1=7 Marks)

02) Answer the following questions.

1) Explain what is meant by Internet?

.....

.....

.....

.....

2) Write four activities to use internet?

- a)
- b)
- c)
- d)

3) Give two usage of ICT in following fields?

1) Agriculture

- a)
- b)

2) Hospital

- a)
- b)

3) Education

- a)
- b)

4) What is the meaning of Application Software? Write two examples?

.....
.....
.....
.....

- 1).....
- 2).....

5) Write the correct sequential order of starting a computer?

.....
.....
.....
.....

03) Answer the following questions.

(2+4+6+4+4 =20 Marks)

1) Write three things cannot do in the computer lab?

- a)
- b)
- c)

2) Describe the computer hardware? Given 2 examples?

-
.....
- 1).....
 - 2).....

3) Write three methods to disposes the electronic waste?

- 1).....
- 2).....
- 3).....

4) What is the meaning of input devices? . Give two examples for it?

.....

-
-
- 1).....
- 2).....

5) Write the correct sequential order of shutting down a computer?

.....

.....

.....

.....

(4+4+3+5+4= 20 Marks)

04) Answer the following questions.

1) What are the three main components of a 'solving problem'?

- 1)..... 2).....
- 3).....

2) Write suitable algorithm for preparing tea?

.....

.....

.....

.....

.....

.....

3) Write the input, process and output to find the perimeter of a rectangle?

- ❖ Input :-
- ❖ Process :-
- ❖ Output :-

4) Draw the flowchart to find the perimeter of a rectangle.

(3+5+6+6 =20 Marks)