


බස්නාහිර පළාත් අධ්‍යාපන දෙපාර්තමේන්තුව - කොළඹ අධ්‍යාපන කලාපය மேல் மாகாணக் கல்வித் திணைக்களம் - கொழும்பு கல்வி வலயம்	බස්නාහිර පළාත් අධ්‍යාපන දෙපාර්තමේන්තුව - කොළඹ අධ්‍යාපන කලාපය மேல் மாகாணக் கல்வித் திணைக்களம் - கொழும்பு கல்வி வலயம்	- කොළඹ අධ්‍යාපන කලාපය Department - Colombo Ed
දේශීය ආර්ථික දිනය - 2017 இரண்டாம் தவணை மதிப்பீடு - 2017		
9 ශ්‍රේණිය தரம் 9	සංගීතය (අපරදිග) I හා II පවුය சங்கீதம் (மேலைத் தேய) வினாத்தாள்-1&11	පැය දෙකයි இரண்டு மணித்தியாலங்கள்

Underline the correct answer.



1. Letter name of the following is

- i. A flat ii. C sharp iii. E flat iv. G flat

2. The rest would suit the following time signature would be



3. “ දුර ජෙන තැනිතලා ” is an example for
 i. Gramophone gee ii. Flim song iii. Bhakthi gee iv. Jana gee

4. Which of the following is the odd one out

- i. Onchiliwaran ii. Daru nelavili iii. Bhakthi gee iv. Paru gee



5. Which of the following is described correctly


- i. E flat major, Tonic , second inversion ii. C minor , Tonic, second inversion
 iii. B flat major , Tonic , root position iv. E flat major , tonic, first inversion

6. The correctly written key signature for B major is



- i. ii. iii. iv.

7. A minor triad would be



- i. ii. iii. iv.

8. Correct way of grouping for 8/6 time would be

- i.  ii.  iii.  iv. 

9. Another name for ABA form is i. AB form ii. ABC form iii. ABACA form iv. Episodical form

10. The instruments of string quartet would be

- i. 2 violins, 2 violas ii. 2 Violins, Viola, Cello iii. 2 Violins 1 Double bass iv. Violin, viola

11. Music suitable for small group of performers would be

- i. Symphony ii. Prelude iii. Overture iv. Chamber music

12. An Austrian composer would be i. Haydn ii. Bach iii. Handel iv. Beethoven

13. Vibrations per second is called

- i. Pitch ii. Amplitude iii. Frequency iv. Decibels

14. Which of the following instruments are in same category?

- i. Kettle drum, Ear drum ii. Double bass, Double bassoon iii. Clarinet, oboe iv. Harp, Harpsichord

15. Which of the following are Baroque composers

- i. Bach, Beethoven ii. Beethoven, Scarlatti iii. Handel, Bach iv. Mozart, Handel

16. Which of the following has the similar meaning to Decrescendo

- i. Calando ii. Fortissimo iii. Diminuendo iv. Dolce

17. Which of the following is the correct ornament of



i.



ii.



iii.



iv.

18. Which of the following is the odd one out

- i. D major – B minor ii. C major – A minor iii. A major – F minor iv. G major – E minor

19. The name of the note is



- i. A ii. F sharp iii. C iv. D

20. The degree raised in the Harmonic minor scale is

- i. Mediant ii. Sub-dominant iii. Sub-mediant iv. Leading note



PART II

Answer question no 01 and two others.

01. Answer the questions based on the following extract.

Waltz

SCHUBERT

- i. What is the title of the piece ?
- ii. Explain “Waltz”
- iii. Name the key signature of the piece.....
- iv. Describe the interval marked with a square
- v. Explain *mf* Ped._____
- vi. Explain the time signature
- vii. Explain >  
- viii. Below is the first four bars of the melody , Invert it in oriental notation (2 marks)

02. Write the following scales as required.(3x2 = 6 marks)

i. E harmonic minor , ascending in minims , use the key signature

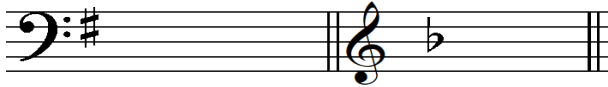
ii. In F clef , B major scale ascending & descending in Crotchets , with accidentals

iii. Describe these Intervals



(2 marks)

iv. Write the following Triads of the given key signature (2 marks)



Major triad

minor triad

03. i. Write the following instruments.(3 marks)

- Two double reed instruments i..... ii.....
- Transposing Brass instruments i..... ii.....
- Concert pitch
- Another name for English Horn
- Name a light song by Ananda Samarakoon

ii. Transpose the following melody **one octave lower** in to the Bass clef (2 marks)



iii. Write (convert) the following melody in compound time (2 marks)



iv. Complete each bar with rests properly grouped. (3 marks)



04.i. Name the composer of the following works.(1/2 x 6 = 3 marks)

- | | |
|-----------------------------|---------------------------------|
| a. Christmas oratorio | b. Rinaldo |
| c. Eroica symphony | d. Marriage of Figaro..... |
| e. Creation | f. 48 preludes and fugues |

ii. Answer the questions below.(3 marks)

- Who composed music for the Royal fire works ? what kind of a work is it ?Name another work by this composer
- How many symphonies did Beethoven compose ?.....
- Who is known as the **Father of symphony** ? State the reason of it
- Describe two of the following briefly.(2x2=4 marks)

Ternary Form

Binary Form

Rondo Form

