

බස්නාහිර පළාත් අධ්‍යාපන දෙපාර්තමේන්තුව - කොළඹ අධ්‍යාපන කලාපය බස්නාහිර පළාත් අධ්‍යාපන දෙපාර්තමේන්තුව - කොළඹ අධ්‍යාපන කලාපය බස්නාහිර පළාත් අධ්‍යාපන දෙපාර්තමේන්තුව - කොළඹ අධ්‍යාපන දෙපාර්තමේන්තුව மேல் மாகாணக் கல்வித் திணைக்களம் - கொழும்பு கல்வி வலயம் மேல் மாகாணக் Western Provincial Education Department - කොළඹ අධ්‍යාපන කලාපය බස්නාහිර පළාත් අධ්‍යාපන දෙපාර්තමේන්තුව - කොළඹ අධ්‍යාපන කලාපය බස්නාහිර පළාත් අධ්‍යාපන දෙපාර්තමේන්තුව - කොළඹ අධ්‍යාපන දෙපාර්තමේන්තුව மேல் மாகாணக் கல்வித் திணைக்களம் - கொழும்பு கல்வி வலயம் Department - Colombo Ed			
බස්නාහිර පළාත් අධ්‍යාපන දෙපාර්තමේන්තුව - කොළඹ අධ්‍යාපන කලාපය மேல் மாகாணக் கல்வித் திணைக்களம் - கொழும்பு கல்வி வலயம்			
දෙවන වාර අග්‍රේණි - 2017 இரண்டாம் தவணை மதிப்பீடு - 2017			
<table style="width: 100%; border: none;"> <tr> <td style="border: 1px solid black; padding: 5px; width: 30%; text-align: center;"> 6 ශ්‍රේණිය தரம் 6 </td> <td style="border: none; text-align: center; padding: 5px;"> සංගීතය (අපරදේශ) I හා II පවුය சங்கீதம் (மேலைத் தேய) வினாத்தாள்-1&11 </td> <td style="border: 1px solid black; padding: 5px; width: 30%; text-align: center;"> පැය දෙකයි இரண்டு மணித்தியாலங்கள் </td> </tr> </table>	6 ශ්‍රේණිය தரம் 6	සංගීතය (අපරදේශ) I හා II පවුය சங்கீதம் (மேலைத் தேய) வினாத்தாள்-1&11	පැය දෙකයි இரண்டு மணித்தியாலங்கள்
6 ශ්‍රේණිය தரம் 6	සංගීතය (අපරදේශ) I හා II පවුය சங்கீதம் (மேலைத் தேய) வினாத்தாள்-1&11	පැය දෙකයි இரண்டு மணித்தியாலங்கள்	

Name

Underline the correct answer.

1. A man made sound in the school garden is

- i. Sound of sea waves ii. Sound of wind iii. Sound of school bell iv. Sound of a river

2. National Anthem of Sri Lanka was composed by

- i. Sanath Nandasiri ii. Mr Ananda Samarakoon iii. Mr Loinal Ranwala iv. Dr Amaradewa

3. An Anniversary party is a

- i. Religious function ii. School function iii. National function iv. Social function

4-6. Match the following notes from the key board

A



B

D



C



A

7. The great staff has Lines.

- i. 9 ii. 11 iii. 10 iv. 12

8. Third line of the Treble clef is

- i. E ii. G iii. F iv. B




9. The given note is

- i. G as a crotchet ii. E as a crotchet iii. F as a crotchet iv. E as a minim

10. Which note has 4 counts?

- i. Semibreve ii. Crotchet iii. minim iv. Quaver

11. Which note is written correctly?



- i. ii. iii. iv.

12. Which of the following is a key board instrument

- i. Side drum ii. Trumpet iii. Piano iv. Cymbal

13. The note



- is i. G ii. A iii. B iv. C

14. The note



- is i. A ii. B iii. G iv. C

15. When music moves as 1 – 2 , 1 – 2 , it is

- i. Duple ii. Triple iii. Quadruple iv. all of these

16. Two quavers make a

- i. Crotchet ii. Minim iii. Quaver iv. Semi breve

17. Five lines of the treble clef is i. GBDFA ii. ACEG iii. FACE iv. EGBDF

18. Another name for Treble clef is i. F clef ii. G clef iii. C clef iv. Alto clef

Mark ✓ or ×


19. Music of the past is usually slow ()

20. We can make an improvised shaker using an empty tin & seeds. ()


Part II

Answer question no 01 & two others.

01. Write the letter names of the following notes. $\frac{1}{2} \times 6 = 3$ marks



ii. Name the following signs and symbols (notes ,bar line ,double bar ,clef)





iii. Fill the following chart correctly.

Time value



Note

Rest



Semibreve




Minim



Crotchet



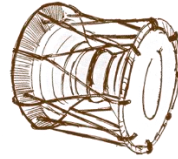
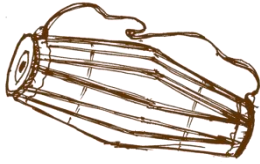
Quaver



02.i. Put the correct time signature at the correct place. ii. Put the bar lines correctly.



ii. Name the following drums (Geta beraya , Udekkiya)



03. Choose the word from the bracket & fill the blanks correctly.

(Old music , New music , G clef , key board , happy birthday to you , wedding march
(Religious function , pleasant , duple , ଧର୍ମ ଭାଗ୍ୟ ଗୀତ)

- i. A march is in time.
- ii. is sung at poruwa ceremony.
- iii. is played at church weddings.
- iv. Melodica is a instrument.
- v. Sound of babys laugh is a sound.
- vi. Deepawali is a Hindu
- vii. We sing in a birthday party.
- viii. " Air on G string " belongs to
- ix. The treble clef is known as a
- x. " Entertainer of Scot Joplin " is a piece of

04. Look at the following song & answer the questions.

The bad tempered Dragon

Once there was a Dra - don, a bad tem - pered Dra - gon

Mag - gon Dra - gon was his name, Lived in - side a cav - ern

top of a mou - tain, peo - ple could see his smoke and flames.

- i. Name the title of the music
- ii. Circle the highest note and the lowest note.
- iii. How many bars are there in the song ?
- iv. How many Crotchet notes are found in the song.....
- v. How many bars have semibreves only.....
- vi. - ix .Give the letter names of the notes marked A B C & D (3 marks)

A..... B..... C.....D.....

x. Name an instrument that can be play the above tune