


සමස්ත හිමිකම් ඇවිරිණි Copyright Reserved All Rights Reserved		බස්නාහිර පළාත් අධ්‍යාපන දෙපාර්තමේන්තුව மேல் மாகாணக் கல்வித் திணைக்களம் Department of Education - Western Province	
වර්ෂ අවසාන ඇගයීම අනුමැතිය ලබා ඇත Year End Evaluation - 2016			
ශ්‍රේණිය கிராம் } 06 Grade	විෂය பாடம் } Western Music Subject	පත්‍ර வினாத்தாள் } I, II Paper	පැය மணித்தாளம் } 02 Hours


Name/Index no


Underline the correct answer.

1. A pleasant sound heard in the school is
 i. Car horns. ii. Children singing iii. Dog barking iv. Children making noise

2. The name given to  is i. Five lines ii. Great staff iii. Four spaces iv. Stave

3. The musical Alphabet consists of
 i. A B C D E F G ii. FACE iii. E G B D F iv. G B D F A

4. Which of the following is written correctly


5. Highest pitch of the following is


6. A Minim is equal to _____
 i. 2 quavers ii. 4 quavers iii. 3 Crotchets iv. 2 semi breves


7. We count "one two , one two " for _____
 i. Triple time ii. Quadruple time iii. Beat time iv. Duple time

8. Birthday song is sung at _____. i. a wedding ii. a birthday party iii. a Funeral iv. in a Mosque

9. A song shows the "most love of the mother " is
 i. Edelweiss ii. Looby loo iii. Pitter patter iv. Mother of mine

10. Five lines of the Treble clef is i. G B D F A ii. EGBDF iii. FACE iv. A C E G

11. A song belong to "New music " is
 i. Blue bells of Scotland ii. My Bonnie iii. Twinkle Twinkle iv. Lets get together

12. Underline the hidden word

 i. FACE ii. ACEG iii. BEAD iv. CAGE

13. Melodicas are played in

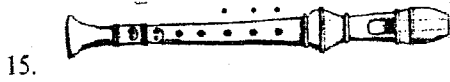
i. Brass bands

ii. Military bands


iii. School bands

iv. Pop bands

14. A pleasant sound is i. a bomb blast ii. Birds singing iii. an aeroplane is taking off iv. a Crow crowing




is i. B ii. G iii. A iv. C



is i. B ii. A iii. F iv. C



* **



1.


2.

3.

4.

18.-20. Write the suitable name given by the picture.

(C major scale , Conductor , Great staff)



.....

.....

.....


Part II

Answer question no. 01 and two other questions.


01.a. Write the letter names of the following notes. (1/2 X 6 = 3 marks)



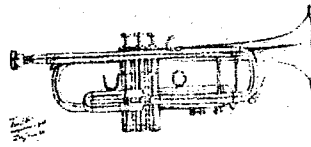
b. Write the Time name of the following (4 marks)



c. Here below are four musical instruments belong to four sections of the orchestra. Select the section and write it at the correct place. ($\frac{1}{2} \times 4 = 2$ marks)



Side drum



Trumpet



Violin



Clarinet

String	Wood-wind	Brass	Percussion

d. Write the first line of a song you've learnt in the class. (1 mark)

.....

02. Refer to the song and answer the questions given below.

Garlic Bread

i. How many bars are there in the song ?

ii. Give two names for the given clef. i..... ii.....

iii. Circle the highest note and the lowest note .

iv. How many Crotchet notes are found in the melody

v. Name the notes in bar 1.

vi. Name the Rest in bar 4

vii. Write the English meanings of p - f.....




viii. Name the term given to the dots under the notes


ix & x questions are as follows. (Underline the correct answer.) (2 marks)

- a. Where is the double bar found (at the beginning / at the end)
- b. The song is about (Three children / The doctor)
- c. This melody can be played (on a key-board / on a side drum)
- d. How many times does the C in a space appear in the piece (7 times / 8 times)


03. a. Write the ascending scale of C major in semi breves. (Treble clef) (5 marks)



b. Write one note equal to each of the following group of notes. (3 marks)



c. Fill the following blanks with suitable solfa names. (1/2 x 4 = 2 marks)




Doh Me Soh Doh

04. a. Add the suitable clef to the following. (4 marks)



B B G D M.C

b. Write a rest same as the previous note. (4 marks)



c. Write the notes shown in the key board. (2 marks)



M.C



M.C

