

විශ්වකීර්ති පාසල දකුණු පළාතේ පාසල් - කොළඹ දිස්ත්‍රික්ක විශ්වකීර්ති පාසල දකුණු පළාතේ පාසල් - කොළඹ දිස්ත්‍රික්ක Western Provincial Education Department - Colombo Educational Zone Western Provincial Education Department - Colombo Educational Zone		
දෙවන වාර්ෂික - 2016 இரண்டாம் தரவாண்டு - 2016 Second Term Evaluation - 2016		
II ශ්‍රේණිය தரம் II Grade II	භූගෝල විද්‍යාව I පත්‍රය புலியியல் வினாத்தாள்-I Geography Paper I	පැය එකයි ஒரு மணித்தியாலம் One Hour

Instructions

- Answer all questions on this 1st paper itself.

- Of the alternatives given below, underline the best answer from the question no 01-10.

- 01 It is the sea which is completely covered with the earth.
 1 Mediterranean sea, Red sea 2 Caspian sea, Aral sea
 3 Arabian sea, China sea 4 Japan sea, Yellow sea
- 02 It is a climate that is distributed in North Europe and North Asia.
 1 Tundra climate 2 Mediterranean climate
 3 Tropical climate 4 Dry climate
- 03 It is not a feature in a farming country.
 1 The market is broad. 2 The education is low.
 3 The market is limited. 4 Lack of wealth resources
- 04 The most contribution of the composition of the industries in Sri Lanka is,
 1 Food and Tobacco products.
 2 Processed metal products and other non metallic mineral products.
 3 Chemicals and rubber and plastic products.
 4 Food and garments.
- 05 This main soil can be seen in the land area from Putalam to Mullaitivu along the North Western coast of the Dry Zone and in the Jaffna peninsula in Sri Lanka.
 1 Alluvial soil. 2 red brown soil
 3 red yellow latosol soil 4 Reddish brown laterite soil
- 06 The areas that Mica are found.....
 1 Kahatagaha mine, Bogala, Botale 2 Kahatagaha mine, Pallekelle, Ragedara
 3 Thalathuoya, Badulla, Godakawela 4 Bogala, Madhumana, Mailapitiya
- 07 Select a feature on a map face.
 1 Sale 2 Direction 3 Key 4 Government building
- 08 It is an indicator to measure development during the early period.....
 1 Per capita income 2 Literacy
 3 Health facilities 4 Maternal mortality rate

09 What are the countries engaged in commercial dairy farming in the world.

1 India, Sri Lanka, China

2 China, Sri Lanka, Malaysia

3 Argentina, China, Zew Zealand

4 Denmark, Zew Zealand, Mexico

10 According to the grid on which 1:50,000 maps of Sri Lanka have been constructed, no 01 map is.....

1 point pedro

2 Manipay

3 Matara

4 Tangalla

- Read the following statements from question no 11 to 18 and circle 'T' if it is true and circle 'F' if it is flase.

11 Lightning can be divided into four categories.

(T/F)

12 Bush fires occur naturally or through human activities.

(T/F)

13 Even though different ethnic and religions communities represent the whole population, they all are Sri Lankans.

(T/F)

14 Soil is formed by decomposition of organic materials for a long time and by mixing up remains of weathering rocks.

(T/F)

15 The market will not be broad on the improvement of infrastructure facilities.

(T/F)

16 Baguio cyclone can occur around the Bay of Bengal and in Indian ocean.

(T/F)

17 Two raw materials ; Kaolin and Bola meti are used for the industry related to clay.

(T/F)

18 Infrastructure facilities development can be identified as a new trend in development.

(T/F)

- Underline the correct answer by matching 'A' and 'B' from the question no 19 to 20.

19 The world population according to the continents can be showed as follows. Match them.

A	B
1. Asia	A. 16%
2. Africa	B. 8%
3. Europe	C. 60%
4. North America	D. 10%
	E. 5%

I) A B C D

II) C A B D

III) B C A E

IV) D A B C

20 The following grid shows the countries of iron and steel production and the production centres of them. Select the best answer.

A	B
1. China	A. Ural zone
2. Japan	B. Eastern industrial zone.
3. Russia	C. Southern region of Manchuria
4. India	D. Michigan lake region
	E. Osaka

I) A B E D

II) D A B C

III) A C B D

IV) C E A B

- Fill in the blanks with the suitable word or words from the question no 21 to 25.

21 Troposphere extends up to from the surface of the earth.

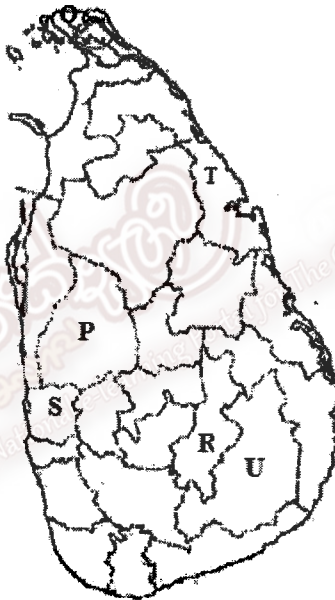
22 Agro-Technological park is situated at

23 Plastics products are a product of the chemical industry.

24 In 1:50,000 Topographic maps, the scale is depicted in ways.

25 Sri Lanka had to undergo the tragic experiences of Tsunami catastrophe on the 26th of December in

- Fill in the blanks with the letter from the question no 26 to 30 according to the Sri Lankan map.



26 The letter which denotes the rutile distribution. (.....)

27 The letter which denotes the district with highest population density after Colombo. (.....)

28 The letter which denotes the district affected by landslides. (.....)

29 The letter which denotes a district belongs to 'Coconut Triangle'. (.....)

30 The letter which denotes the district affected by cyclones. (.....)

- Select the correct answer from the brackets from the question no 31 to 40.

- 31 It can be identified as a main paddy cultivating country in Asia.
(Thailand / Madagascar / Australia)
- 32 A round% of the total world population lives in the continent of Asia.
(60 / 16 / 10)
- 33 Among the SAARC countries, has the highest level of human development.
(Sri Lanka / India / Pakistan)
- 34 The volcano; Eyjafjallajokull erupted in AD.
(2014 / 2015 / 2016)
- 35 lightning occurs by discharging between clouds and clouds.
(Cloud lightning / Air lightning / Earth lightning)
- 36 rocks are formed by cooling and solidifying magma in the interior of the Earth.
(Igneous / Sedimentary / Metamorphic)
- 37 The Earth consists of% of water.
(97 / 79 / 71.8)
- 38 Within the short period AD, there was an accelerated growth of world population.
(before 1750 / after 1750 / after 2000)
- 39 is a human activity that affects for Bush fire.
(Setting fire / Lightning / Severe drought)
- 40 The population growth in Sri Lanka in AD 2015 is
(0.8 / 1.2 / 1.9)

(1× 40)

බටහිර පළාත් අධ්‍යාපන දෙපාර්තමේන්තුව இலங்கைப் பகுதி அகல்வியல் துறைமன்றம் Western Provincial Education Department බැංකොල පළාත් අධ්‍යාපන දෙපාර්තමේන්තුව இலங்கைப் பகுதி அகல்வியல் துறைமன்றம் Western Provincial Education Department බැංකොල පළාත් අධ්‍යාපන දෙපාර්තමේන්තුව இலங்கைப் பகுதி அகல்வியல் துறைமன்றம் Western Provincial Education Department - Colombo Educational Zone	දෙවන වර ඇගයීම - 2016 இரண்டாம் தவணை மதிப்பீடு - 2016 Second Term Evaluation - 2016 ඉගෙනීම විද්‍යාව II පත්‍රය புலியியல் வினாத்தாள்-II Geography Paper II	පටන් දෙකට இரண்டு மணித்தியாலங்கள் Two Hours
------------------------------------------------------------------------------------------------------------------------------------------------------------------------------------------------------------------------------------------------------------------------------------------------------------------------------------------------------------------------------------------------------	-----------------------------------------------------------------------------------------------------------------------------------------------------------------------	--------------------------------------------------

- The paper consists of part I and part II
- All the questions in part I are compulsory. There part I has two parts. (A & B)
- Answer only 4 questions in part II.

Part I

01 (A) Study the coloured 1:50,000 topographic map and answer the questions.

- I. Name the places which are denoted by A, B, C.

1. A - Slope / River
2. B - an ancient place / a temple
3. C - a bridge / railway station

(M. 03)

- II. Answer the following questions using the map.

1. Draw the symbol that denotes a school.
2. Draw an administrative boundary found in the map and name it.
3. Draw the symbol of a main road where we can see in the map.

(M. 03)

- III. What is main cultivation found in the map?

(M. 01)

- IV. Write two relief features found in the map.

(M. 02)

- V. Which cultural feature shows from the letter 'D'.

(M. 01)

 $\omega(B)$

- I. Mark the following places and name them on the given world map.

1. African geo plate.
2. Aral sea.
3. Andes mountain range.
4. Gobi desert.
5. China

(M. 05)

- II. Mark the following places and name them on the given Sri Lankan map.

1. Mahailuppallama paddy research institute.
2. Kelani river.
3. Bogala vein graphite mine.
4. Yala national park.
5. Natural harbour Trinomalee.

(M. 05)

Part II

02

- I. What are the two parts of Lithosphere? (M. 02)
- II. Write the three main gases in order according to the composition of the atmosphere. (M. 03)
- III. Draw the water cycle and name it and explain its functioning. (M. 05)

03

- I. Name two largest continents in the world. (M. 02)
- II. Name the main climatic zones in the world. (M. 03)
- III. Explain how the climate in your area affects human activities giving three examples. (M. 05)

04

- I. Name two main wildlife reserves in Sri Lanka. (M. 02)
- II. Many sub systems can be identified when we study the forests in Sri Lanka. Name three sub systems of forests. (M. 03)
- III. Write two advantages on forests and wildlife reserves in Sri Lanka and explain it. (M. 05)

05 Answer the questions according to the following given map.

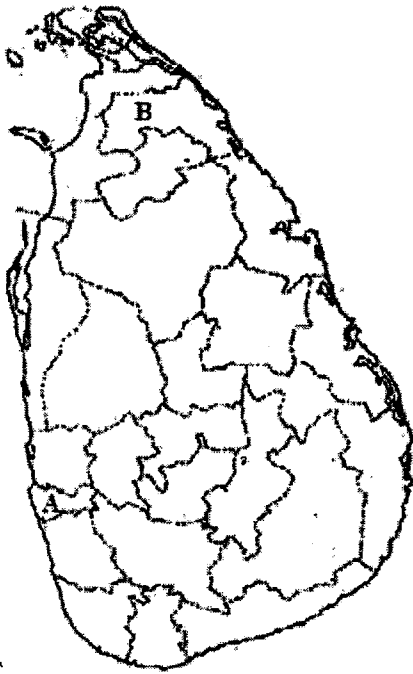


- I. Name A and B in the above given world map that denote two deposits of iron ore. (M. 02)
- II. C, D and E show three areas where one can see graphite. Name them. (M. 03)
- III. Write three factors that contribute to the formation of soil and explain them. (M. 05)

06

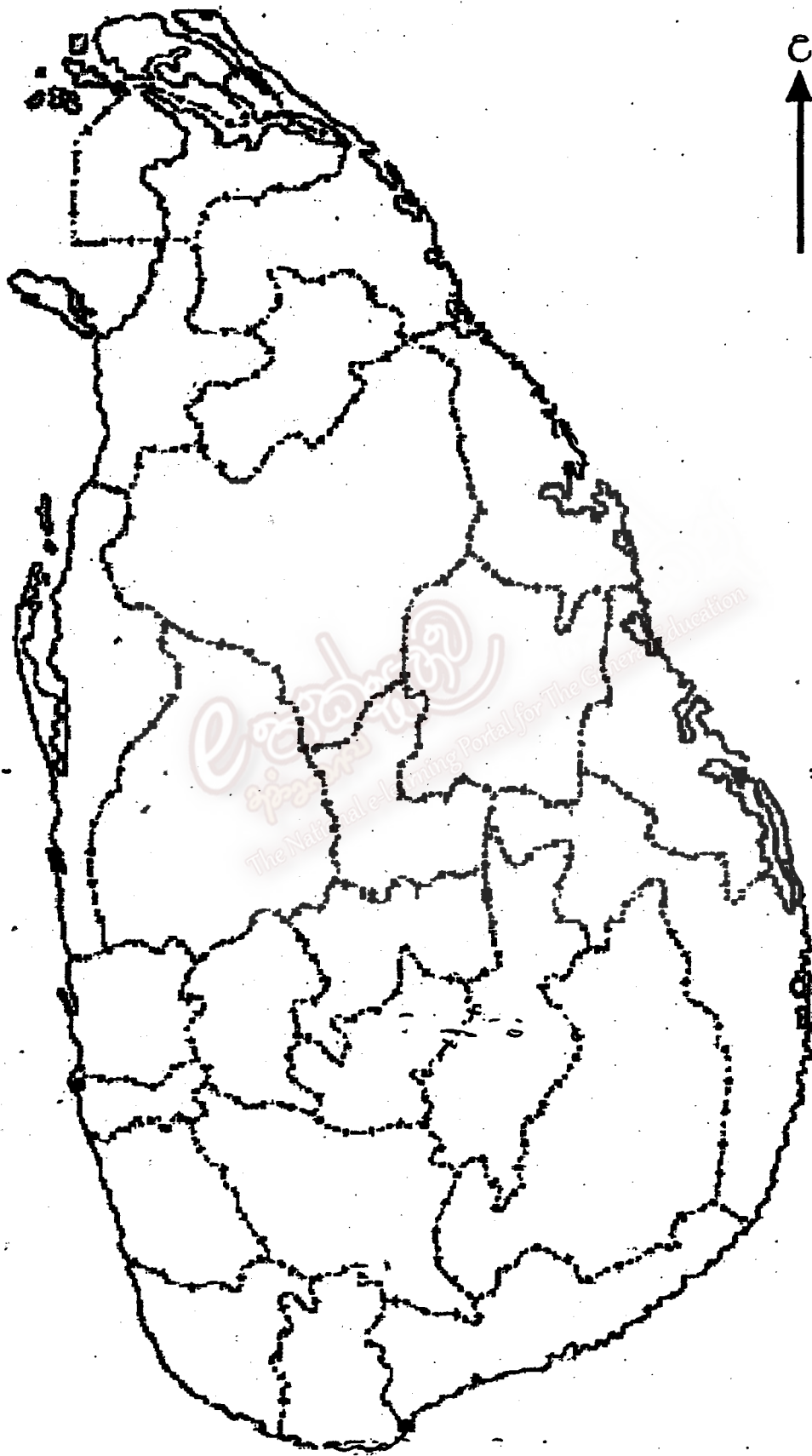
- I. Write two manufacturing industries. (M. 02)
- II. Write three factors influenced for the location of an industry. (M. 03)
- III. Write two countries where iron and steel industry is located and mention the factors that have contributed to locate the centres of iron and steel production in one. (M. 05)

07 Answer the questions according to the given Sri Lankan map.

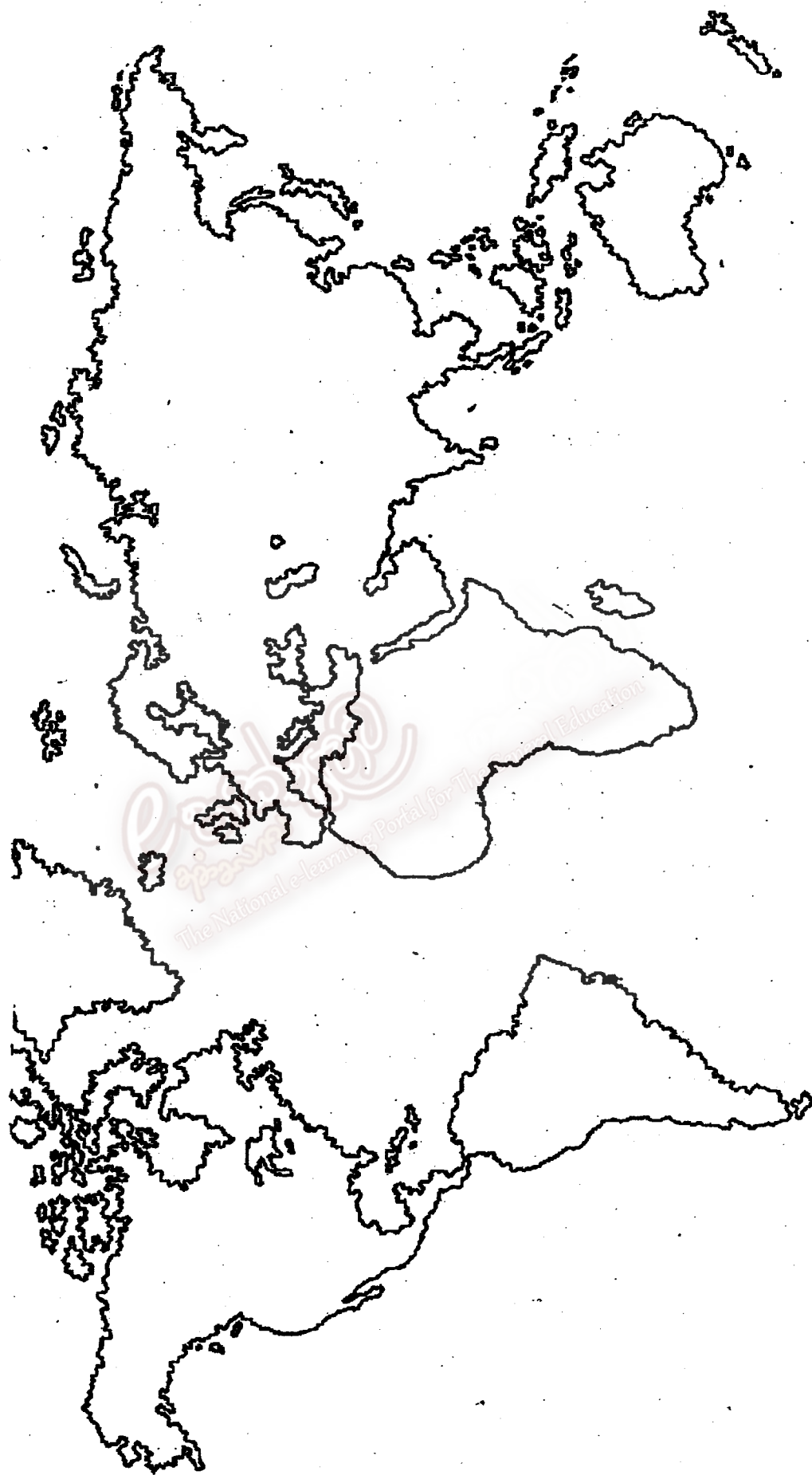


- I. Name A and B that denote the countries which have the highest and the lowest population density in Sri Lanka. (M. 02)
- II. Write the three ways of dividing population according to age. (M. 03)
- III. Mention two factors that affect the inequalities in the distribution of population in Sri Lanka and explain them. (M. 05)

එදිරිපාය
අධ්‍යාපන
The National e-learning Portal for The General Education



12



- Instructions for Muslim Schools.
 - When the questions in part II are choosen, write also the answers to the question no 8 and the question no 9.
-

08

- Among natural resources, name two non-exhaustible resources. (M. 02)
- Minerals which have an important place among natural resources can be divided into three parts. What are they? (M. 03)
- Write three ways of water pollution and describe one mentioning how to prevent the water pollution. (M. 05)

09

- Mention two sources used to generate energy power. (M. 02)
- Point out three problems in consumption of energy sources. (M. 03)
- Write three advantages on importance of the conservation of energy resources and explain one from them. (M. 05)

e-শিক্ষা
পোর্টাল
The National e-learning Portal for The General Education