
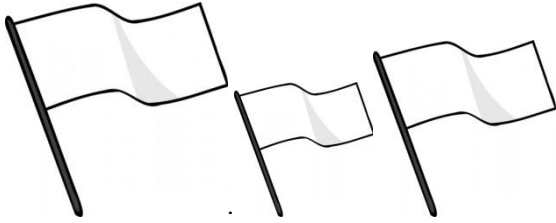


1. වර්ගය අනුව ගොඩවල් දෙකකට වෙන් කරන්න.




Two large empty circles are positioned to the right of the fruit box, connected by a vertical line. The top circle is connected to the top-right corner of the box, and the bottom circle is connected to the bottom-right corner of the box. These circles are intended for students to write the names of the fruits they have grouped.


2. කුඩාමරූපයේ සිට ලොකුරූපයට අඳින්න.




.....



.....




.....



.....


3. ගැලපෙන වචනය යා කරන්න.




වෘත්තය



සමචතුරස්‍රය

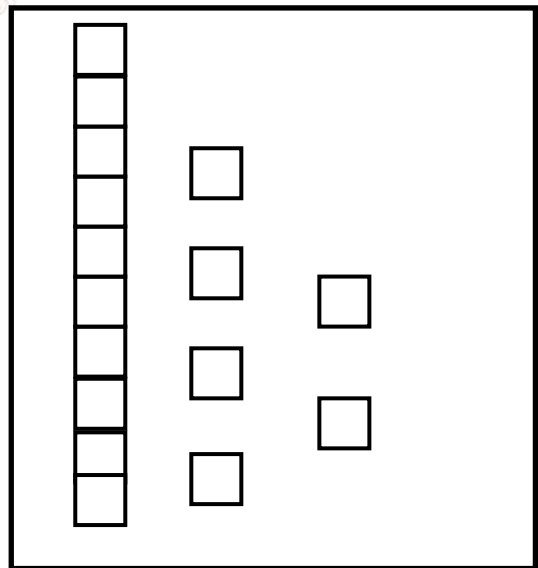


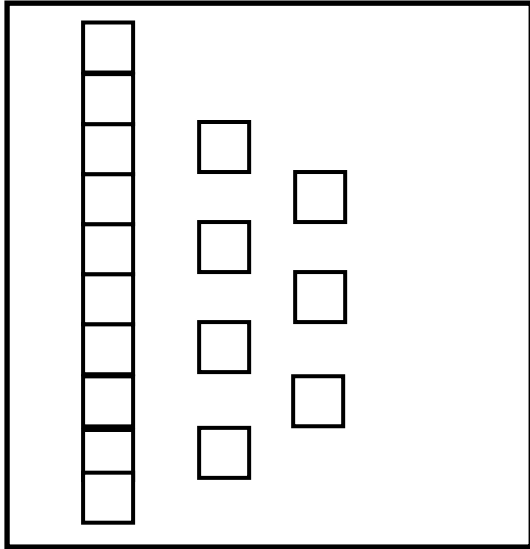


ත්‍රිකෝණය



සෘජුකෝණාස්‍රය

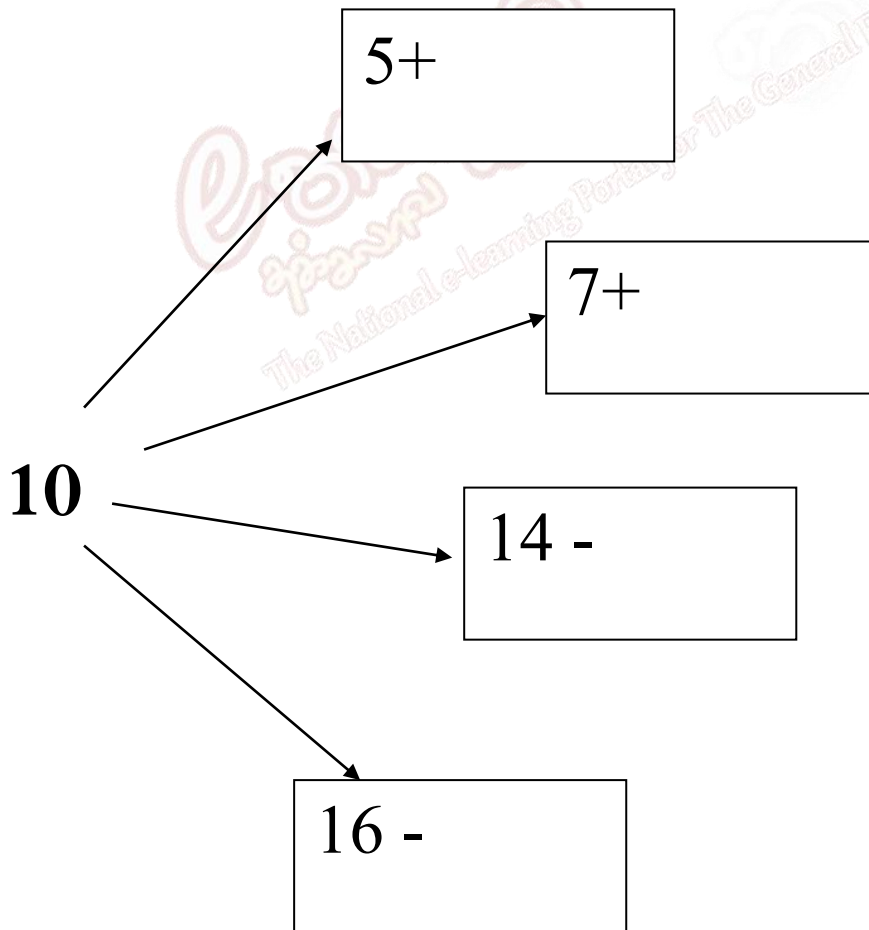
4. සංඛ්‍යාව ලියන්න.



5. අකුරින් ලියන්න.

- i. 17 -.....
- ii. 15 -.....
- iii. 12 -.....
- iv. 19 -.....
- v. 14 -.....

7. දහය හඳුම.


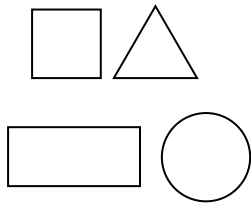


6. ඉලක්කමෙන් ලියන්න.

- i. දහතුන -.....
- ii. දහය -.....
- iii. දහසය-.....
- iv. දහඅට-.....
- v. එකොළහ-.....



8. හැඩ හතර යොදාගෙන නිර්මාණයක් අඳින්න.



9. අඩු කරන්න.

i.  $17 - 5 =$

ii.  $19 - 3 =$

iii.  $15 - 2 =$

iv.  $16 - 4 =$

v.  $18 - 8 =$

10. රටාවේ ඊලඟ රූපය අඳින්න.

