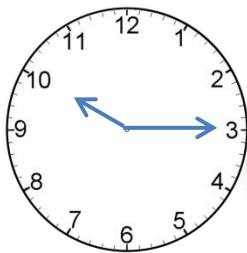


**Unit 9****The clock and the calendar****Test 2**

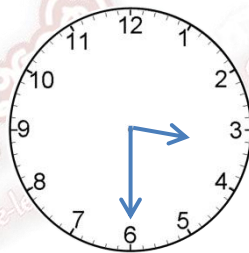
Fill in the blanks to get the correct time of the given clocks.

01



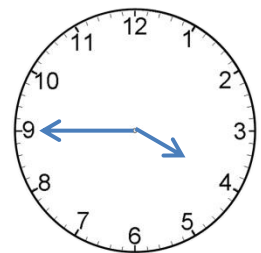
It's \_\_\_\_\_ fifteen.

02



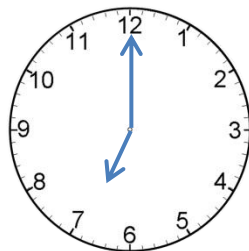
It's \_\_\_\_\_ thirty.

03



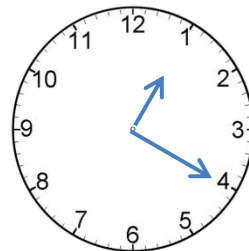
It's four \_\_\_\_\_.

04



It's \_\_\_\_\_ o'clock.

05



It's one \_\_\_\_\_.