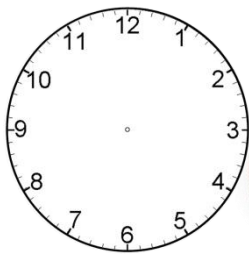


**Unit 9**

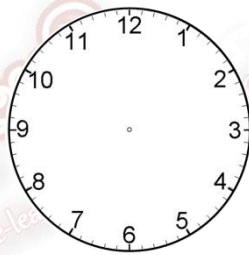
**The clock and the calendar**

**Test 1**

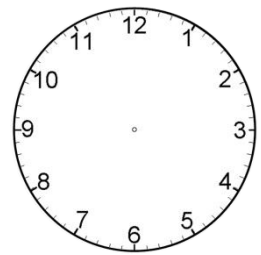
Set the given time in each clock.



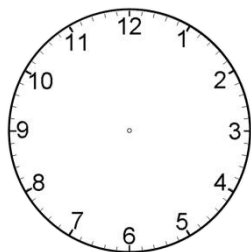
It's six o'clock.



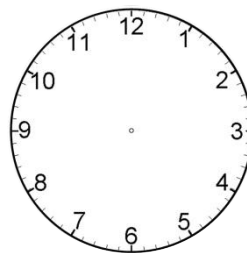
It's four o'clock.



It's ten fifteen.



It's seven thirty.



It's five twenty.