



PROVINCIAL EDUCATION OFFICE  
**THIRD TERM TEST - 2018**  
**WESTERN MUSIC**

Grade 06

Two Hours

Name / Index No. :

Answer all questions on this paper itself.

Paper I

- **Underline the correct answer.**

01. Which function is celebrated by Buddhists?

- (a) Deepawali                      (b) Poson                      (c) Easter                      (d) Christmas

02. Silence in music is Indicated by,


- (a) Sound                      (b) Clef                      (c) Note                      (d) Rest

03. The Black note with a Stem is called,

- (a) Minim                      (b) Crotchet                      (c) Quaver                      (d) Semi Breve

04. " දොම්කිට කිටදොම් " is a sound of

- (a) Rabana                      (b) Daula                      (c) Geta Beraya                      (d) Udekkiya

05. The Dot below the note means (  )

- (a) Legato                      (b) Staccato                      (c) Lower note                      (d) Accidental

06. Waltz is a,

- (a) Dance                      (b) March                      (c) Song                      (d) Drama

07. Recorder is a,

- (a) String Instrument                      (b) Percussion Instrument                      (c) Blown Instrument                      (d) Key-Board Instrument

08. Bass Drum is belongs to,

- (a) String                      (b) Wood - Wind                      (c) Percussion                      (d) Brass - Wind

09. A 'stave' is used to write,

- (a) Instruments                      (b) Letters                      (c) Notes                      (d) Figures

10. Underline the correct answer?

- (a) Great staff has 10 lines
- (b) 'G' clef is another name for Bass clef
- (c) 'C' clef is another name for Bass clef
- (d) Treble clef is also known as 'G' clef

11. Name this Note?



- (a) 3<sup>rd</sup> Space 'C' in T. C.
- (b) 3<sup>rd</sup> Space 'E' in B. C.
- (c) 3<sup>rd</sup> Space 'C' in B. C.
- (d) 3<sup>rd</sup> Space 'E' in T. C.

12. Which of the following is the 'pleasant' Sound ?

- (a) Baby Crying
- (b) Bomb blast
- (c) Road traffic noise
- (d) Bird Songs

13. Select the 'Natural Sound' ?

- (a) Baby Crying
- (b) Bomb blast
- (c) Road traffic noise
- (d) Bird Songs

14. Underline the 'Odd' one ?

- (a) Jayamangala Gatha
- (b) Wedding march
- (c) Magul Bera
- (d) Birthday song

15. Which Rhythm is used in the 'National Anthem of Sri - Lanka' ?

- (a) 2 beat Rhythm
- (b) 4 beat Rhythm
- (c) 3 beat Rhythm
- (d) 5 beat Rhythm

16. Which 'Rest' hangs on the 4<sup>th</sup> line ?

- (a) Semi breve Rest
- (b) Minim Rest
- (c) Breve Rest
- (d) Crotchet Rest

17. Under line the highest pitch note?



18. Which of the following is generally used for right hand ?

- (a) Treble clef
- (b) Bass clef
- (c) Alto clef
- (d) Tenor clef

19. Select the nursery 'Rhyme' ?

- (a) Baa Baa Black Sheep
- (b) National Anthem
- (c) Edelwise
- (d) Jayamangala Gatha

20. Who Composed 'Air on the G string' ?

- (a) Bach
- (b) Haydn
- (c) Scott Joplin
- (d) Mozart

- Answer three of the following, including the first question

01. Answer the following questions by using this musical phrase.

### Come, Let's Sing a Merry Round

Come, let's sing a mer-ry-round, Wake the cheer-ful, cheer-ful glee;

Glad-ly- let -our- voic-es sound: Oh hap-py, hap-py we, hap-py we

- (1) Write the name of this song ?  
.....
- (2) What is the 'clef ' used in this song ?  
.....
- (3) How many 'Minims ' are there in the melody ?  
.....
- (4) What is the 'Highest pitch ' note ?  
.....
- (5) What is the 'lowest pitch ' note ?  
.....
- (6) What is the 'Time Signature ' of this melody ?  
.....
- (7) How many 'quaver notes ' are there in the melody?  
.....
- (8) Name the notes marked 'A ' and 'B ' .  
A .....  
B .....
- (9) How many 'Bars ' are there in the melody  
.....  
.....

02. Write the letter names of the following notes.

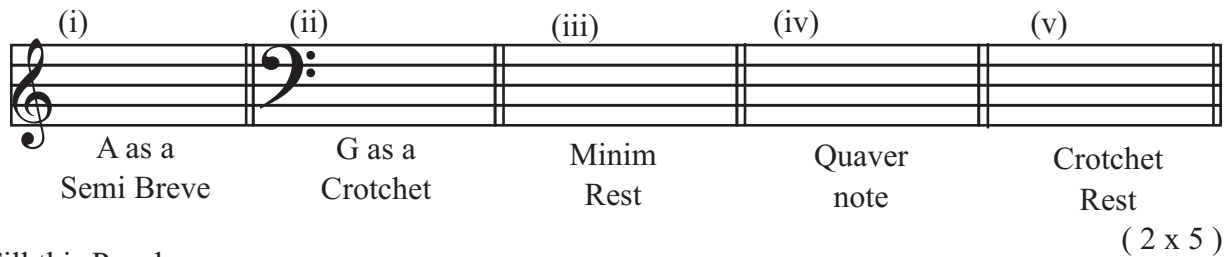


03. Match 'A' with 'B'


- A
- (1) Time - Signature
  - (2) Bass clef
  - (3) Double Bar
  - (4) Key - Signature
  - (5) Stave
  - (6) Treble clef
  - (7) Bar line
  - (8) Notes
  - (9) Piano
  - (10) Rests

- B
- a) " P "
  - b)
  - c)
  - d)
  - e)  $\frac{2}{4}, \frac{3}{4}$
  - f)
  - g)
  - h)
  - i)
  - j) (1 x 10)

04. Write these notes and Rests.



05. Fill this Puzzle.



**Across:-**

- 1) another name for 'G' clef.
- 2) another name for 'F' clef.
- 3) These are used to write the musical language.
- 4) The solfa name of the 4<sup>th</sup> degree of the scale.

**Down:-**

- 5) This used to accompany 'Virudu'. (2 x 5)

Paper - I

- 1 -(b) 2 -(d) 3 -(b) 4 -(c) 5 -(b) 6 -(a) 7 -(c) 8 -(c) 9 -(c) 10 -(d)  
 11-(a) 12 -(d) 13 -(d) 14 -(d) 15 -(a) 16 -(a) 17 -(a) 18 -(a) 19 -(a) 20 -(a)

(Marks 01x20=20)

Paper II

01. 1. Come , Let's Sing a merry Round. 2. Treble Clef 3. 3 minims  
 4. E 5. D 6.  $\frac{4}{4}$   
 7. 14 quaver notes 8. A) - B B) - A 9. 8 bars (1 x 10)

02. Write the letter names of the following notes.

(i) (ii) (iii) (iv) (v)  
 B F G C C  
 (2 x 5 = 10)

03. (i) (e) (ii) (f) (iii) (c) (iv) (d) (v) (g)  
 (vi) (j) (vii) (h) (viii) (i) (ix) (a) (x) (b)

(1x10= 10 marks)

04. Write these notes and Rests.

(1) (2) (3) (4) (5)  
 A as a Semi Breve G as a Crotchet Minim Rest Quaver note Crotchet Rest  
 (2x5 = 10 marks)

05.

1	T	5	R	E	B	L	E
			A				
2	B	A	S	S			
			A				
3	N	O	T	E	S		
4	F	A	H				

(2x5 = 10 marks)