



PROVINCIAL DEPARTMENT OF EDUCATION - NORTH WESTERN PROVINCE

SECOND TERM TEST - 2018

Grade 07



WESTERN MUSIC

Two Hours

Name / Index No. :

Answer all questions on this paper itself.

Paper -1

01. Which of the following is a Sri Lankan drum
(i) Thabla (ii) Congo (iii) Thammattama (iv) Snare drum
02. Which of the following is suitable time signature for given rhythm.

(i) $\frac{2}{8}$ (ii) $\frac{4}{4}$ (iii) $\frac{2}{4}$ (iv) $\frac{3}{4}$
03. Which of the following is the meaning of mezzo forte?
(i) Moderately loud (ii) Moderately soft (iii) Very loud (iv) Very soft
04. The total value of the given notes would be 
(i) Minim (ii) Crotchet (iii) Breve (iv) Semibreve
05. Which of the following are the line drawn vertically which divide music into equal measures?
(i) Leger lines (ii) Stave (iii) Bar line (iv) Italian term
06. Which of the following is the smallest distance between nearest two notes on the key board?
(i) Interval (ii) Semitone (iii) Tone (iv) Time signature
07. Which of the following is a group of 3 beat rhythm?
(i) Simple Duple (ii) Simple Triple (iii) Simple Quadruple (iv) Triplet
08. A composer who was travelled the west minister Abbey among the English loyalty,
(i) G. F. Handel (ii) J. S. Bach (iii) L. V. Beethoven (iv) W. A. Mozart
09. A performance by 3 players is called,
(i) Duet (ii) Quintet (iii) Quartet (iv) Trio

10. Which of the following rest is used to complete the bar with the time signature of



11. "Castenets " is also called,

- (i) Tam Tam (ii) Tambourine (iii) Clappers (iv) Triangle

12. Who wrote 6 Brandenburg concertos ?

- (i) Mozart (ii) Bach (iii) Handel (iv) Scarlatti

13. 2nd line of the treble clef is,

- (i) B (ii) E (iii) D (iv) G

14. In which of the following clef is middle C written above the stave,

- (i) Bass clef (ii) Alto clef (iii) Treble clef (iv) Tenor clef

15. Natheswaram is played in a

- (i) Church (ii) Kovil (iii) Temple (iv) Mosque

16. Which of the following is a percussion instrument

- (1) Cello (2) Oboe (3) Gong (4) Violin

17. Which of the following is the Tone above from C sharp

- (1) E (2) D (3) D sharp (4) E sharp

18. Which of the following is the number of spaces on the Great staff ?

- (1) 9 (2) 8 (3) 11 (4) 10

19. Staff is another name for,

- (1) Stave (2) Notes (3) Clef (4) Accidentals

20. What is another name for Kandyan drum ?

- (1) Getaberaya (2) Yak beraya (3) Davula (4) Udekkiya

(1 x 20 = 20 Marks)

- Answer three questions of the following including the first question.


01. Answer the following questions based on this given passage.

Minuet in G major

Johann Sebastian Bach

- (1) What is the title (name) of the piece (1 mark)
 - (2) What is the time signature of the piece ? (1 mark)
 - (3) What are the clefs used in this piece (1 mark)
 - (4) Give another names for that clefs? (1 mark)
 - (5) Write the number of bars in the piece. (1 mark)
 - (6) What is the time name of the last note at the end of the bar in Bass (1 mark)
 - (7) Who is the composer of the above piece (1 mark)
 - (8) To which period does this composer belong (1 mark)
 - (9) Write the letter names of the circled notes
 A. B. (2 marks)
- (10 marks)

02. (1) Write the following scale




Treble clef, C major, descending mark semitones.

(05 marks)

(2) Name the following instruments.

(i)



(ii)



(iii)



(iv)



(v)



(05 marks)

03. (1) Write 4 lines of Baila or Virindu you learnt.

.....







.....

.....

.....

(05 marks)

(2) Complete the following chart by drawing the necessary notes, rests and number of counts.

Time name	Note	Rest	Counts
Breve	0		
	0		
Minim			2
			1
Quaver			

(½ x 10 = 5 marks)

04. (1) Match A and B

A	B
	2 2
	3 8
	3 4
	4 8
	2 4

(05 marks)

(2) (a) Write another note after the given note as required.

Semitone lower	Tone higher	Tone lower

(03 marks)

(b) Complete the following cages

Religion	Religious funtion	Song used
Buddhist	Bakthi gee
.....	Deepavali	Bajans
.....	Christmas	Jingle Bells
.....	Ramazan	No songs

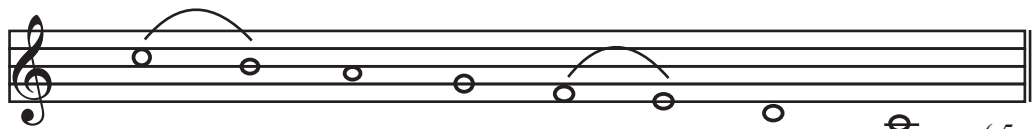
($\frac{1}{2} \times 4 = 2$ marks)

Paper I

- | | | | | | | |
|-----------|-----------|-----------|-----------|-----------|-----------|------------|
| 01. - (2) | 02. - (3) | 03. - (1) | 04. - (4) | 05. - (3) | 06. - (2) | 07. - (2) |
| 08. - (1) | 09. - (4) | 10. - (4) | 11. - (3) | 12. - (2) | 13. - (4) | 14. - (1) |
| 15. - (2) | 16. - (3) | 17. - (3) | 18. - (4) | 19. - (1) | 20. - (1) | (20 marks) |

Part II






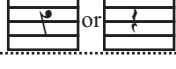



01. (1) Minuet in G major (1 mark) (2) $\frac{3}{4}$ (1 mark) (3) Treble clef / Bass clef (1 mark)
 (4) G clef / F clef (1 mark) (5) 16 bars (1 mark) (6) Crotchet (1 mark)
 (7) Johann Sebastian Bach (1 mark) (8) Baroque period (1 mark)
 (9) A - B B - G (2 marks) (10 marks)

02. (1)  (5 marks)




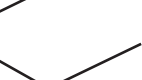

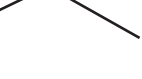




- (2) (i) Castenents (ii) Bass drum (iii) Triangle (iv) Tambourine
 (v) Cymbol (5 marks)

03. (1) Any baila or virindu given in the syllabus. (5 marks)

(2)

Time name	Note	Rest	Counts
Breve	11011		8
Sembreve	0		4
Minim			2
Crotchet		 or 	1
Quaver			1/2

A B (1/2 x 10 = 5 marks)

		2
		2
		3
		8
		3
		4
		4
		8
		8
		2
		4

(05 marks)

04.

(1) (a)

The musical notation consists of three staves. The first staff is in treble clef and contains two notes: a quarter note on G4 and a quarter note on F4. Below it is the label "Semitone lower". The second staff is in bass clef and contains two notes: a quarter note on G3 and a quarter note on A3. Below it is the label "Tone higher". The third staff is in treble clef and contains two notes: a quarter note on G4 with a sharp sign (#) and a quarter note on F4 with a flat sign (b). Below it is the label "Tone lower".

(03 marks)

(b) Complete the following cages

Religion	Religious funtion	Song used
Buddhist	Vesak / Poson	Bakthi gee
Hindus	Deepavali	Bajans
Christians	Christmas	Jingle Bells
Muslims	Ramazan	No songs

($\frac{1}{2} \times 4 = 2$ marks)