













පළමු වාර පරීක්ෂණය - 10 ශ්‍රේණිය - 2018
First Term Test - Grade 10 - 2018

Index No **Western Music I** Time : One Hour

සියලුම ප්‍රශ්නවලට පිළිතුරු සපයන්න.

- 1. Basic element in musical form
 - 1. Notes 2. Triplet 3. contrast 4. Rhythm
- 2. 

Which Time - Signature is suitable for the above passage?

 - 1. $\frac{3}{4}$ 2. $\frac{6}{8}$ 3. C 4. Φ
- 3. The Damper pedal of the piano is also called
 - 1. Right pedal 2. Soft pedal 3. Una corda pedal 4. Middle pedal
- 4. Relative Minor of E^b major has?
 - 1. B^b E^b A^b 2. B[#] E^b A^b 3. B^{bb} E^b A^b 4. B E^b A^b
- 5. Programme music based on the?
 - 1. Rhythm 2. Notes 3. Environment 4. Sound
- 6. Who were the German Composers of the following?
 - 1. Liszt / Chopin 3. Schubert / Mozart
 - 2. Schumann / Wagner 4. Verdi / Haydn
- 7. Which Instrument is know as "Cinderella of the Orchestra"?
 - 1. Bassoon 2. Viola 3. Cello 4. Flute
- 8. Which of the following notes would indicate the pulse in 6 8 time?
 - 1.  2.  3.  4. 
- 9. single Reed transposing instrument?
 - 1. Bassoon 2. Flute 3. Piccolo 4. Clarinet
- 10. The oriental conversion of the given western notation would be?
 
 - 1.  3. 
 - 2.  4. 
- 11. Instruments used for Nurthi?
 - 1. Harmonium, Tabla 3. Harmonium, Trumpet
 - 2. Maddalaya, Dolki 4. Mrudangam, Flute

12. Which of the following is not a primary Triad?
 1. Tonic triad
 2. Sub dominant triad
 3. Dominant triad
 4. Mediant triad
13. Which of the following terms has opposite meaning?
 1. Decrescendo / Pianissimo
 2. Legato / Lento
 3. Rallentando / Accelerando
 4. Diminuendo / Decrescendo
14. Name of the instrument which is commonly referred to as Piano?
 1. Harp
 2. Clavichord
 3. Pianoforte
 4. Organ
15. Irregular note group occurs in Simple time.
 1. Duplet
 2. Triple
 3. Triplet
 4. Duple
16. "Leaning note" is another name for
 1. Turn
 2. Mordent
 3. Appoggiatura
 4. Acciaccatura
17. Nationality of the composer of "Song without words"?
 1. German
 2. Russian
 3. Polish
 4. Italian
18. Which of the following is a "Nadagam"?
 1. Suwada Padma
 2. Mihikata Nalawala
 3. Shantha John Ge Veediye Kade
 4. Olupipila
19. Different from others?
 1. Accelerando
 2. Ritardando
 3. Rallentando
 4. Crescendo
20. Instrument associated with Spanish and Latin American music?
 1. Violin
 2. Guitar
 3. Tampura
 4. Esraj
21. Instrument used to keep the correct pitch?
 1. Flute
 2. Bass drum
 3. Oboe
 4. Side drum
22. Whole bar rest in $\frac{4}{2}$ time?
 1. Dotted minim rest
 2. Semi breve rest
 3. Breve rest
 4. Crotchet rest
23. Which of the following scales has it's Dominant enharmonically equivalent to the Leading note of $F^\#$ minor?
 1. B major
 2. F major
 3. B^b major
 4. C major
24. Composer lived the shortest
 1. Beethoven
 2. Mozart
 3. Handel
 4. Haydn
25. Term indicate a Five member group?
 1. Quintet
 2. Trio
 3. Quartet
 4. Duet
26. Composition for a chamber ensemble
 1. Surprise symphony
 2. Eine kleine nacht music
 3. Fidelio
 4. Magic flute
27. The true statement related to classical period?
 1. Instruments :- Harpsichord, Clavichord
 2. Composers :- Scarlatti, Vivaldi
 3. Accompanying style :- Alberti Bass
 4. Time :- From 1820 to 1900

28. Key - signature of E major?



29. The common time is same as

1. $\frac{4}{2}$ 2. $\frac{2}{4}$ 3. $\frac{4}{4}$ 4. $\frac{3}{4}$

30. Which of the following is Diatonic scale?

1. Consists tones and semi tones 3. Consists semi tones only
2. Consists tones only 4. Consists Major 2nd s

31. Different from others?

1. Jamaican fare well 3. Yellow bird
2. Island in the sun 4. Kookaburra

32. Which of the following would not indicate the same?

1. Song form 2. 3 part form 3. Episodical form 4. Open form

33. What would to the frequency when the pitch getting lower?

1. It increases 2. It remains the same 3. Decreases 4. Non of these

34. What is Beethoven 3rd symphony?

1. Eroica 2. Pastoral 3. Fidelio 4. Choral

35. Concordant interval?

1. Maj 2nd 2. Min 7th 3. Maj 7th 4. Maj 3rd

36. Letter name of the note on the second leger line below the stave of F clef?

1. C 2. E 3. A 4. M - C

37. Which of the following are know as "Achala Swara" (fixed notes)

1. ँ ऌ 2. ः, ं 3. ः ऌ 4. ः ँ

38. Contemporary composer of Scarlatti?

1. Schubert 2. Haydn 3. Beethoven 4. Handel

39. Which of the following pair of keys Share the same Key - Signatures?

1. E major / E minor 3. D major / D minor
2. E^b major / C minor 4. F major / F minor

40. An Interval Semi tone less than a major interval

1. Minor interval 3. Perfect interval
2. Major interval 4. Non of these


පළමු වාර පරීක්ෂණය - 10 ශ්‍රේණිය - 2018
First Term Test - Grade 10 - 2018

Index No **Western Music II** Time : Two Hour

Answer 5 questions including the 1st question.

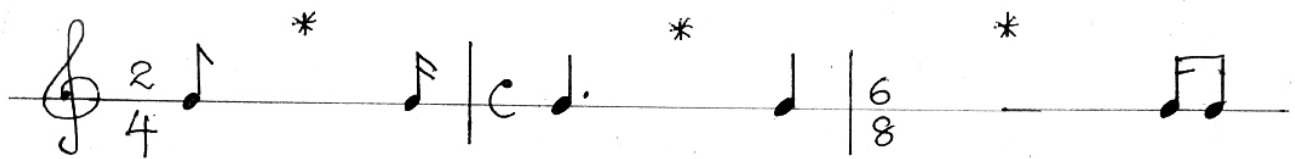
1. *Andante grazioso* Mozart

- i) Give the meaning of *Andante*
- ii) Describe the time signature as simple or compound
 duple, triple or quadruple
- iii) Write as a semi breve an enharmonic equivalent of the last right - hand note.

- iv) Name an instrument that could play the right - hand part of bars 3,4,5 state the family to which it belongs to
Instrument..... family
- v) Name and circle the lowest note of the piece. As (a)
- vi) Name the key of this piece?
- vii) Name the other key that has the same key signature
- viii) Name another work of the composer?
- ix) What is the Nationality of the composer?
- x) Name a contemporary composer of this period?
- xi) Give the number of time this rhythm appears 
- xii) Give the time name of the shortest note?

(1 x 12 = 12 marks)

- 2
- a) Fill in with correctly grouped rests to complete the bars.




- b) *Add the time signature and barlines to this extract, which begins on the first beat of the bar.



(6 marks)


*Write suitable rest to complete the final bar.

- c) Write these notes and rests correctly grouped in double time. Add the new time signature.




(3 marks)

- 3
a) Write the ascending melodic minor scale which has the given key signature. Mark Tones with slurs.




(4 marks)

- b) Write the Treble clef and then the scale of E^b major in quavers descending, using accidentals. Mark semitones with slurs.




(4 marks)

- c) Write the Relative Harmonic minor scale of G major ascending and descending. Use key signature and mark semitones with slurs.




(4 marks)

- 4
a) Transpose this melody in to Alto clef



(1/2 x 10 = 5)

- b) Write the tonic triads of the keys stated below Insert correct key signature.



(3 marks)

- c) Write a short note of selecting one topic
i) Chamber Music ii) Folk Music iii) Rondo form


(3 marks)

- 5
a) Answer the given questions

i) A chromatic semitone above F[#] is


ii) The mediant of B major is

iii) The enharmonic equivalent of G flat is

iv) Write a single note equal in value to 


(4 marks)

b) Name the following intervals



(4 marks)

c) Write the following notes.




Middle C

A on a line

(2 marks)

d) Work out and name the following ornament.



Name.....

(2 marks)

6.

a) Fill in the blanks.

i) is the highest pitched instrument in the woodwind section.

ii) is popular at ceremonial occasions and was used to send signals in battles

iii) The is held between the player's knees and propped up on the floor by a spike.

(3 marks)

b) Divide the following percussion instruments as Definite pitched and Indefinite pitched.
(Timpani, Triangle, xylophone, Gong)

Definite pitched	Indefinite Pitched

(4 marks)

c) Write the meaning of the following words.

* Pizzicato

* Con sordini

(2 marks)

d) Write a description about the 3 pedals of the piano.

(3 marks)

- 7.
- a) i) Who was known as the Father of string quartet?
- ii) Name the 4 instruments in string quartet
- b) i) Name a composer of romantic period
- ii) Write the Nationality of him.

(4 marks)

- c) Write 2 characteristics of classical and Romantic period

Classical Period	Romantic Period

(4 marks)

- d) Match A with B

(A)

- i) Prince of the concerto
- ii) Six Brandenburg concerto
- iii) Children's corner suite
- iv) Opera Composer

(B)

- Baroque period
- Mozart
- Wagner
- Debussy

(4 marks)

Western Music I
First Term Test - 2018
Grade - 10

Answers - 1st Paper

1	3	11	1	21	3	31	4
2	2	12	4	22	3	32	4
3	1	13	3	23	3	33	3
4	4	14	3	24	2	34	1
5	3	15	3	25	1	35	4
6	2	16	3	26	2	36	1
7	2	17	1	27	3	37	2
8	3	18	3	28	4	38	4
9	4	19	4	29	3	39	2
10	2	20	2	30	1	40	1

