



Provincial Department of Education North Western Province

FIRST TERM TEST - 2018

Grade 08

WESTERN MUSIC


02 hours

Name / Index No. :

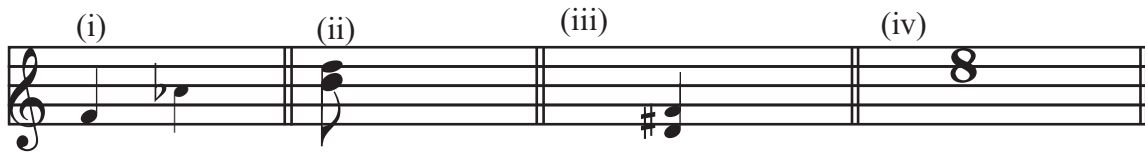
- Underline the correct answer

Part - I

01. Which one is the correct way of writing "Clef" ?



02. Which one is a "Melodic Interval" ?



03. Which one is the lowestst pitch of the following ?



04. Which major scale has one flat ?

- (i) G Major                      (ii) D Major                      (iii) F Major                      (iv) C Major

05. What is duple time ?

- (i) 3 beat rhythm              (ii) 2 beat rhythm              (iii) 4 beat rhythm              (iv) 5 beat rhythm

06. How many space are there in a "Great staff" ?

- (i) 8                                  (ii) 9                                  (iii) 10                                  (iv) 11

07. The period from year 1750 to 1820 of the western music history belongs to,

- (i) Baroque period              (ii) Classical period              (iii) Romantic period              (iv) Modern period

08. Which of the following would not indicate the same ?

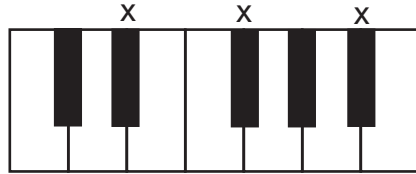
- (i) C                                  (ii) Supertonic                      (iii) RI                                  (iv) RAY

09. What is the smallest distance between two keys

- (i) Tone                      (ii) Semitone                      (iii) Interval                      (iv) Octave

10. What are the notes marked (x) in the key board ?

- (i) B<sup>#</sup>, F<sup>b</sup>, G<sup>#</sup>                      (ii) F<sup>b</sup>, G<sup>#</sup>, C<sup>b</sup>                      (iii) C<sup>#</sup>, D<sup>b</sup>, G<sup>#</sup>                      (iv) E<sup>b</sup>, F<sup>#</sup>, B<sup>b</sup>



11. Who died at the young age of 35 ?

- (i) J. S. Bach                      (ii) F. J. Hydn                      (iii) W.A. Mozart                      (iv) L.V. Beethoven

12. A pleasant sound heard in the Environment is,

- (i) Rustling of leaves                      (ii) Creaking of shoes                      (iii) Sound of Vehicles                      (iv) Gun fire

13. Which of the following is a definite pitched Percussion Instrument ?

- (i) Bass Drum                      (ii) Timpani                      (iii) Snare Drum                      (iv) Cymbal

14. " Submediant" is the,

- (i) 3<sup>rd</sup> degree                      (ii) 4<sup>th</sup> degree                      (iii) 5<sup>th</sup> degree                      (iv) 6<sup>th</sup> degree

15. The drum used in Kandian dance is,

- (i) Yak beraya                      (ii) Rabana                      (iii) Geta beraya                      (iv) Udekkiay

16. The most suitable time sign for simple triple with crotechet beats would be,

- (i)  $\frac{3}{4}$                       (ii)  $\frac{3}{8}$                       (iii)  $\frac{3}{2}$                       (iv)  $\frac{4}{3}$

17. Which of the following is a song suitable for "Round" ?

- (i) My grandfather's clock                      (ii) Row, Row, Row your boat  
(iii) Jamaican Fare well                      (iv) It's a small world


18. Which of the following notes have 4 counts ?

- (i) Quaver                      (ii) Crotchet                      (iii) Minim                      (iv) Semibreve

19. Which of the following is a Viridu Song ?

- (i) ආජ්ඣ නපර ලාභිලා                      (ii) ඕලු පිපිලා                      (iii) ලොවේ දසක පුජිත                      (iv) හදපානේ /// රැයාමේ

20. Which of the following is a C major triad ?



(1 x 20 = 20)

## Part - II

- Answer question No. 1 and two others

01. (i) The following questions are based on the given music piece.

### All Through the Night

- (a) Write the name of this piece.....
- (b) What is the time signature? .....
- (c) Write the English meaning of this sign "*f*" .....
- (d) Name the circled sign .....
- (e) What is the time name (Value name) of the rest in the last bar? .....

(1 x 5 = 5)


(ii) Name the following notes.

.....

(1 x 5 = 5)


02. Write the following major scales, mark semitones with slurs.

(a) (i) G major ascending in minims with key signatures.




(2 marks)

(ii) F major descending in Crotchets without key signatures.



(2 marks)

(b) State whether each of these pairs forms a tone or semitone.




(1 x 3 = 3)

(c) Above each of these notes write another note one Octave higher.



(1 x 3 = 3)

03. (i) Identify the pictures of these composers and name them.



(1 x 3 = 3)

(ii) Fill in the following table with year of birth and the composition of the named composers from the brackets.

Composer	Year of Birth	Composition
F. J. Haydn		
W.A. Mozart		
L.V. Beethoven		

[Moonlight Sonata, 1756, The creation, 1770, Dan Giovanni, 1732]

(1/2 x 6 = 3)

(iii) Match A with B

A

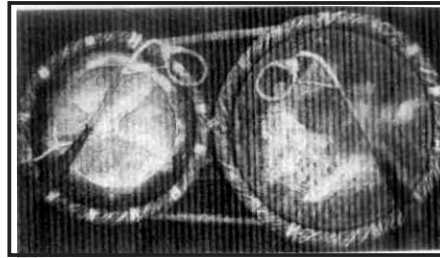

- (a) Eroica
- (b) Haydn
- (c) Mozart
- (d) Beethoven

B

- (i) "Father of the Symphony"
- (ii) "Prince of Concertos"
- (iii) "Shakespeare in Music"
- (iv) 3<sup>rd</sup> symphony




(1 x 4 = 4)

04. (a) Name these Sri Lankan Drums



(i) .....

(ii) .....



(iii) .....

(iv) .....

(v) .....

(1 x 5 = 5)

(b) Name 2 types of Guitars

(1 x 2 = 2)

(i)

(ii)

(c) Select the suitable name of birds and complete the sentences below.

(king fisher / common Drango / Shama / magpie Robin / Grackle / Koel / Crow / Loten's sunbird)

(i) ..... is the most musical of the garden birds.

(ii) ..... is commonly associated with the Sinhala and Tamil New Year.

(iii) ..... is able to imitate other birds and also specially the Cat's "Meow"

(1 x 3 = 3)

Answer Paper - Part - I


- 1 -(ii) 2 -(i) 3 -(iv) 4 -(iii) 5 -(ii) 6 -(iii) 7 -(ii) 8 -(i) 9 -(ii) 10 -(iv)  
 11-(iii) 12 -(i) 13 -(ii) 14 -(iv) 15 -(iii) 16 -(i) 17 -(ii) 18 -(iv) 19 -(iii) 20 -(i)

(1 x 20 = 20)

Part - II

- (01) (i) (a) All through the night  
 (b) 4  
 (c) loud  
 (d) Natural  
 (e) Crotchet rest (1 x 5 = 5)

- (ii) (a) C sharp (b) B natural (c) D flat (d) A sharp (e) E flat. (1 x 5 = 5)

(02) (a) (i)  (2 marks)

(ii)  (2 marks)

- (b) (i) Tone (ii) Semitone (iii) Tone (1 x 3 = 3)

(c)  (1 x 3 = 3)

03. (i) (a) L. V. Beethoven (b) W.A. Mozart (c) F.J. Haydn (1x3=3)  
 (ii)

Composer	Year of Birth	Composition
F. J. Haydn	1732	The Creation
W.A. Mozart	1756	Don Giovanni
L.V. Beethoven	1770	Moonlight Sonata

(½ x 6 = 3)

- (iii) (a) Eroica - 3rd Symphony (b) Haydn - Father of the symphony  
 (c) Mozart - Prince of concerte (d) Beethoven - Shakespeare in Music. (1 x 4 = 4)

04. (a) (i) Gataberaya (ii) Thammattama (iii) Yakberaya (iv) Udekkiya (v) Rabana (1x5=5)  
 (b) (i) Acoustic Guitar (ii) Electric Guitar (iii) 12 string Guitar (iv) Bass Guitar (1x2=2)  
 (c) (i) Magpie robin (ii) Koel (iii) Common drango (1x3=3)