



PROVINCIAL DEPARTMENT OF EDUCATION-NORTH WESTERN PROVINCE

FIRST TERM TEST 2018

Grade 07

GEOGRAPHY

Two Hours

Name / Index No. :

Part - I

- Answer all the questions
 - Select the suitable word from brackets and write it on the given space for question no. 01 to 05
- 01 The North latitude is the North pole in the geographical globe.
(90° / 66½° / 0°)
- 02 The is based on 180° longitude in the geographical globe.
(Greenwich meridian / International date line / Equator)
- 03 The Northern part of the is called the Northern hemisphere.
(Pole / equator / Greenwich line)
- 04 The third largest continent is the continent of
(Asia / North America / South America)
- 05 sea is an internal sea in the continent of Asia. (Red / Caspian / China)
- If the following statements are correct put (✓) if not put (✗) for question no. 06 to 10.
- 06 There are 360 West longitudes in the geographical globe. ()
- 07 Arctic Ocean is the smallest ocean in the world. ()
- 08 Atlantic Ocean is between the continent of America and the continent of Asia. ()
- 09 23½° North latitude is called as the Tropic of Cancer. ()
- 10 The point 90° North latitude is the North pole. ()

● **Underline the most suitable answer for question no. 11 to 15.**

11 The correct statement regarding the shape of the Earth is,

- (1) Earth is considered a spherical object and North and South parts are long.
- (2) Equatorial diameter is larger than polar diameter.
- (3) Polar diameter is larger than equatorial diameter.
- (4) Shown as a complete spherical object.

12 The values of the equator, Tropic of cancer, Arctic circle are respectively in

- (1) 90° N, $23\frac{1}{2}^{\circ}$ N, $66\frac{1}{2}^{\circ}$ N
- (2) $23\frac{1}{2}^{\circ}$ N, $23\frac{1}{2}^{\circ}$ S, $66\frac{1}{2}^{\circ}$ N
- (3) 0° , $23\frac{1}{2}^{\circ}$ N, $66\frac{1}{2}^{\circ}$ N
- (4) 0° S, $23\frac{1}{2}^{\circ}$ S, $66\frac{1}{2}^{\circ}$ S

13 Select the correct statement regarding the Greenwich prime meridian.

- (1) It stretches from North to the equator
- (2) It stretches from East to West
- (3) It is equal to equator in length
- (4) It is equal to 180° longitude

14 The continent that British Islands are belonged to,

- (1) Continent of Asia
- (2) Continent of America
- (3) Continent of Europe
- (4) Continent of Africa

15 The countries that are located only to the North of Sri Lanka are,

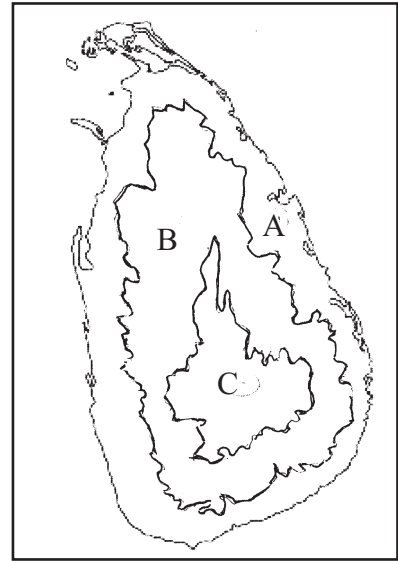
- (1) India, China, Russia
- (2) Australia, China, Andaman Island
- (3) India, Madagascar, Australia
- (4) Russia, Malaysia, China

● **Fill in the blanks using the suitable words for question no. 16 to 20.**

The location of the continent of (16) is to the North of Sri Lanka, the (17) ocean is to the south, and the continent of Africa to the (18) as well as (19) islands are located in to the North Western of Sri Lanka and (20) is another island which is located in the Indian Ocean.

- Answer five question including the first question. First question is compulsory.

01 Answer following questions using the given map of Sri Lanka.



- (1) Name the relief features that can be shown by letter A, B and C. (03 m.)
- (2) Write 3 topographical features that are specific to the zone A. (03 m.)

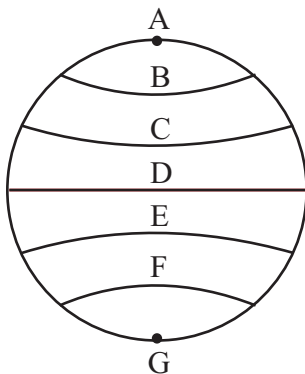
(3) Complete the following grid using the information based on zone 'C'.

Information		Places
1.	Mountain ranges	1. 2.
2.	Plateau	3.
3.	Cities	4. 5.
4.	waterfalls	6.
5.	rivers	7. 8.

(4) Write 2 sectors that are caused to win the tourist attraction in Sri Lanka. (02 m.) (08 m.)

02 Following is a picture of a geographical globe.

(1) Study the following picture and answer the following grid.

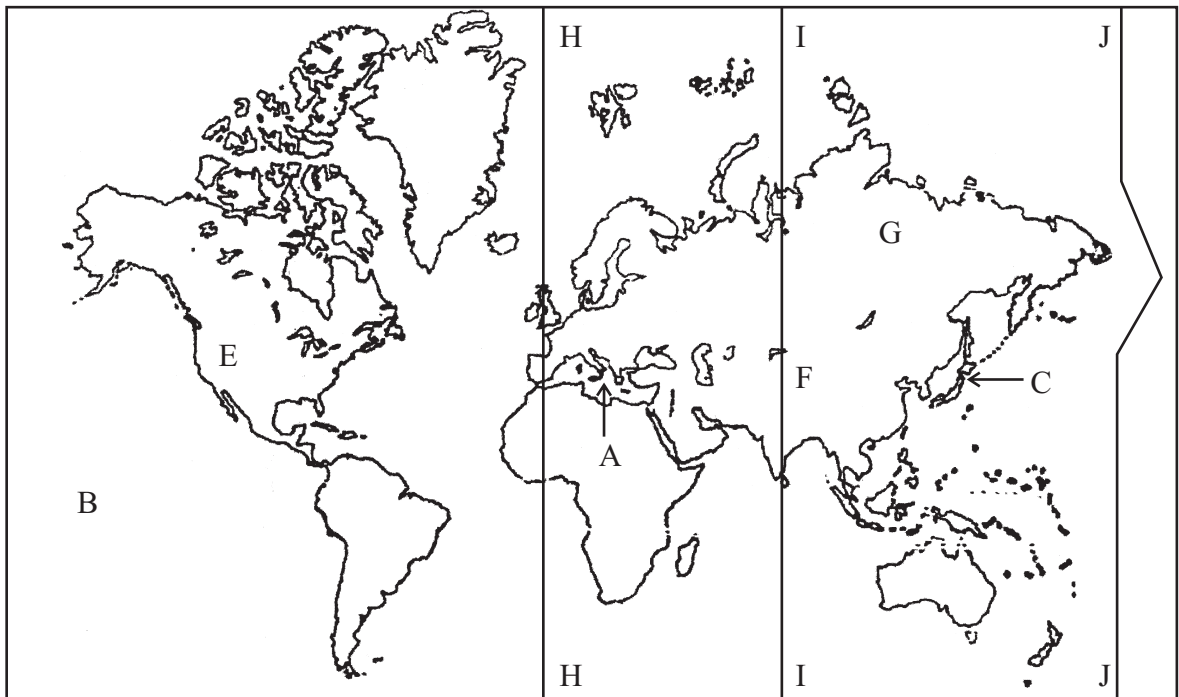


Letter	Name of the latitude	Value of the latitude
A	1.	90° North
B	Arctic circle	2.
C	3.	23½° N
D	4.	5.
E	Tropic of capricorn	6.
F	7.	66½° S
G	8.	9.

(09 m.)

- (2) Write 2 reasons for the importance of the latitudes which are spread from A to G in this Globe. (2 m.)

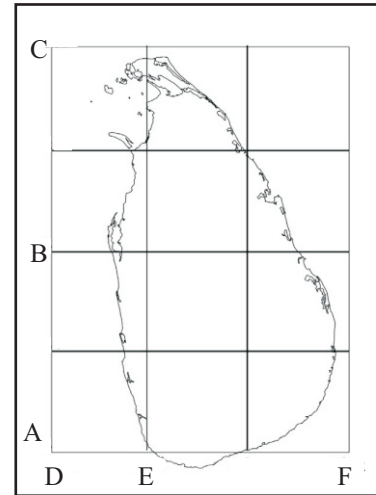
03. Study the given map of the world and answer following questions.



- (1) Name the sea shown by letter A and the City shown by letter B. (2 m.)
- (2) Name the Island shown by letter C and the continent shown by letter D. (4 m.)
- (3) Name the letter from E, F, G shows the largest country in the world. (2 m.)
- (4) Write the values of the longitudes shown by letters H, I, J. (3 m.)

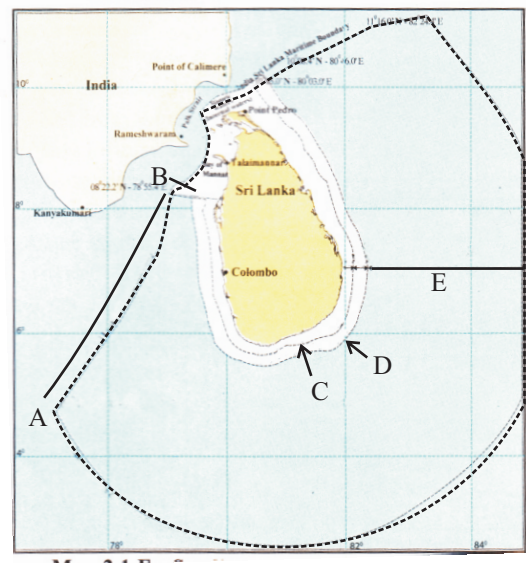
04 Study the given map and answer the question.

- (1) Name the latitudes shown by A, B, C and longitudes shown by D, E, F (6 m.)
- (2) Write the specific location of Sri Lanka correctly using the latitudes and longitudes. (3 m.)
- (3) Name the two places that are used to measure the length from North to South of Sri Lanka. (2 m.)



05 Study the given map and answer the questions given below.

- (1) What is the boundary that is shown by A - B letters? (2 m.)
- (2) What is shown by the dotted line? (3 m.)
- (3) What is the letter that is shown the territorial sea? (2 m.)
- (4) Write the distance of the boundaries shown by letters D and E and Name them. (4 m.)



06 Complete the blanks of following grid shown the rainfall in Sri Lanka.

Type of Rainfall	Months that receive	Features
(1) North - East Monsoon	1. 2.	North - Eastern Parts receive heavy rain.
(2) 3.	May 4. 5.	South Western parts receive heavy rain
(3) Convectional rain	6. 7. September	8. Occurs through out the year
(4) 9.	October 10.	Occur due to the air disturbances 11.

(11 m.)

07 Complete the Puzzle.


Down

- (1) The 23½" South latitude is known as this name.
- (2) A type of trees that are grown in dry and semi arid areas
- (3) A town that belongs to the coastal plain.
- (4) 0° latitude is known as this name.

Across

- (2) This zone is located between 23½° North and South latitudes.
- (3) A Town belongs to North Western Province.
- (5) A country in South America
- (6) The southern boundary of the North temperate zone.
- (7) Bath North east monsoon and the cyclones are occurred in this month
- (8) These treas are grown in coastal line and the lagoons.
- (9) Western and South Western parts of Sri Lanka receive heavy rain through this monsoon.

(11 m.)



(5 m.)

Answer Paper - Part - I

- (01) 90° (02) International dateline (03) equator (04) North America (05) Caspian
 (06) ✗ (07) ✓ (08) ✗ (09) ✓ (10) ✓ (11) 2 (12) 3 (13) 4
 (14) 3 (15) 1 (16) Asian (17) Indian (18) Western (19)
 (20) Maldives (2 x 20 = 40)

Part - II

- 01 (1) A Coastal plain B Intermediate plain C Central hills (3 m.)
 (2) Lagoons, points, bays, Islands, wide plains. (3 m.)
 (3) Give marks for filling the grid according to the relevant information. (8 m.)
 (4) • relief • Variation of climate (2 m.)
- 02 (1) 1. North pole 2. 66½° North latitude 3. Tropic of cancer
 4. equator 5. 0° 6. 23½° South latitude
 7. Antarctic Circle 8. South pole 9. 90° South (9 m.)
 (2) • to know the specific location • to show the boundaries of the countries.
 • to divide areas. (2 m.)
- 03 (1) A Mediterenian Sea B Pasific Ocean (2 m.)
 (2) C Japan D Australia (4 m.) (3) G Russia (2 m.)
 (4) H - 0 longitude I - 80° longitude J - 180° longitude (3 m.)
- 04 (1) A 6° North latitude B 8° North latitude C 10° North latitude
 D 79° east longitude E 80° east longitude F 82 East longitude (6 m.)
 (2) Specific location 5°.55' - 9°.51' North latitude 79°.41' - 81°.53' East longitude (3 m.)
 (3) Point Pedro - Dondra head (2 m.)
- 05 (1) India - Sri Lanka boundary (2 m.) (2) Exclusive economic zone (3 m.) (3) C (2 m.)
 (4) D / E (4 m.)
- 06 (1) November (2) December (3) South West monsoon (4) June
 (5) July (6) March (7) April
 (8) Rain with strong winds (9) Cyclones (10) November (11) Rain with strong winds (11 m.)
- 07 Down: (1) Capricorn (2) Throny bushes (3) Kataragama (4) equator
Across: (2) Tropical (3) Kurunegala (5) Brazil (6) Cancer
 (7) November (8) mangroves (9) Southwest (11 m.)