

# Department of Education - Western Province

## Year End Evaluation - 2013

0487

Grade - 8  
Western Music

Name/Index No .....

Duration 2 hours

Answer all questions.

### Part I

01. Which of the following has a key signature of 5 sharps?


1. E Major      2. B Major      3. A flat Major      4. D flat Major

02. The letter name of this note would be



1. C double flat      2. A double sharp  
3. C flat      4. A double flat

03. Which of the following is the correct time signature of the following



1.  $\frac{3}{4}$       2.  $\frac{4}{4}$       3.  $\frac{2}{2}$       4.  $\frac{4}{8}$

04. The number of quavers in a minim would be

1. 8      2. 4      3. 3      4. 6

05. The number of semitones in the Interval of C-G would be



1. 7      2. 6      3. 8      4. 5

06. Which of the following is equivalent to the 'MA' in oriental notation?

1. Me      2. Soh      3. La      4. Fah

07. Which of the following has the difference of a semitone?



1.      2.      3.      4.

08. Which of the following time signatures for compound duple with dotted beats

1.  $\frac{3}{2}$       2.  $\frac{3}{4}$       3.  $\frac{6}{8}$       4.  $\frac{2}{4}$




Part 11

Answer question no.01 and 02 others.

01. i. Write the time signature at the correct place ( 1 mark )



ii. Write the following Intervals (2 marks)



Perfect 4th      Major 3rd

iii. Add the missing barlines to this extract. It begins on the first beat of the bar (2 marks)



iii. Identify the Instrument which fits the given description . ( 3 marks )

( Double bass, Daula ,Tambourine )

- a. It is a drum which plays with a stick called kadippu on one face and with one hand on the other. -----
- b. This is a small drum with a single head. A number of small metal discs called jingles are fixed in pairs.-----
- c. It is about six feet high so the player has to stand or sit on a high stool. It is a transposing Instrument. -----

04. i. Name 02 composers belongs to classical period (2 marks )

1. ----- 2. -----

ii. Name the composers who are known as ( 1 mark )

1. King of Oratorios	
2. Child prodigy	

iii. Match A and B (1/2X4=2)

- A
- Harmonious Blacksmith
  - Fur Elise
  - 06 Brandenburg concertos
  - Surprise Symphony


- B
- F.J. Haydn
  - J.S. Bach
  - L.V. Beethoven
  - G.F. Handel.

iv. This is the melody of a keyboard Minuet written by Henry Purcell. Look through it and then answer the questions below. (1/2X6=3)

*Allegretto*

- a. What is the time name of the longest note .....
- b. Put the time signature at the correct place.
- c. Give the meaning of the following

(p bar 1) ..... *Allegretto* .....

(  ) ..... *Cres. ( bar 09 )* .....

Here is the first two bars of the melody. Transpose it one octave higher in the same clef. (2m)

*Allegretto*