

Department of Education - Western Province

0512 **Year End Evaluation - 2013**

Grade - 9 Western Music

Name / Index No :-.....

Duration 2 hours

Part 1

Answer all the questions

Underline the correct answer.

01. An Interval sounded together is known as
1. Melodic 2. Unison 3. Harmonic 4. Triad
02. A contemporary composer of Schumann is
1. F. Chopin 2. Beethoven 3. W.A. Mozart 4. J.S. Bach
03. Which of these songs is not in Ternary form
1. I'm a little teapot 2. Drink to me only 3. Ash grove 4. Hot cross buns
04. Which of the following uses the Alto clef
1. Viola 2. Violin 3. Cello 4. Double Bass
05. The left pedal of the pianoforte is called the
1. Damper 2. Una corda 3. Sustaining 4. Sostenuito
06. Who composed "Harmonious Blacksmith"?
1. J.S. Bach 2. G.F. Handel 3. W.A. Mozart 4. F.J. Haydn
07. Which of the following is the Major Triad?
1. GB^bD 2. DFA 3. FAC 4. B^bD^bF
08. Ossicles are found in the
1. Outer ear 2. Inner ear 3. Ear drum 4. Middle ear
09. Which of the following scale has the semitones between 3rd-4th, 7th-8th?
1. Harmonic minor 2. Major 3. Melodic minor 4. Diatonic
10. Which of the following time signatures be double value of $\frac{2}{4}$ time
1. $\frac{4}{2}$ 2. $\frac{2}{2}$ 3. $\frac{3}{4}$ 4. $\frac{4}{4}$
11. The relative major of G minor has
1. B^bE^bA^b 2. F[#]C[#]G[#]D[#]A[#] 3. B^bE^b 4. F[#]C[#]G[#]
12. The Italian term "Da capo" means
1. medium tone 2. quicker[#] 3. From the beginning 4. Slower at once
13. Which of the following brass instruments does not use valves to get different notes?
1. Tuba 2. Trumpet 3. Cornet 4. Trombone

(viii) What names are given to the three octaves in oriental music? _____

(ix) Name 02 artists who sings light songs. _____

(x) Name two Italian terms associated with string instruments. _____

2. (i) Write the following Intervals above the given note. (3 marks)

Perfect 4th diminished 7th Major 6th

(ii) Re-write the following using oriental notation. (4 marks)


(iii) Complete the following bars with rests, marked with "*" (3 marks)

3. (i) Name the following triads as Major or minor. (3 marks)


(ii) Name the following melody an octave lower into Bass clef. (3 marks)

A


B



(iii) Convert the above phrase 'B' to double the value. (2 marks)

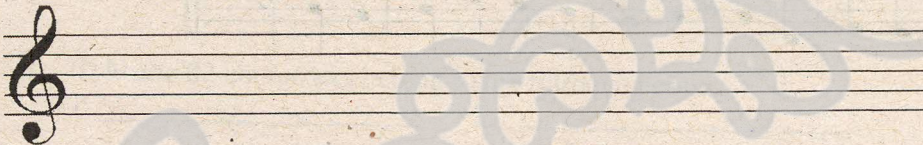


(iv) Identify the following instruments. (2 marks)




4. (i) Write the following scales using Minims. (04 marks)

B Major descending with accidentals



C melodic minor ascending with key signature.



(3 marks)

(ii) Name the composer of the following works and mention the period of the composer.

	A Work	Composer	Period
1	Fidélío		
2	48 Preludes and Fugues		
3	Peter and the wolf		

(iii) Briefly describe Rondo Form. (3 marks)

