

Department of Education - Western Province

Year End Evaluation - 2013

00313

Grade - 7
Western Music

Name / Index No


Duration 2 hours

Underline the correct answer.

Part I

01. Which of the following is M.C.

1. 2. 3. 4.



02. Five lines of the Bass clef is

1. EGBDF 2. FACE 3. ACEG 4. GBDFA

03. The time signature for 4 crotchet beats in a bar will be

1. 4 2. 4 3. 4 4.2
8 2 4 2


04. Which of the following is written correctly

1. 2. 3. 4.



05. Which of the following has a distance of a tone

1. 2. 3. 4.



06. Which of the following is in Duple time

1. March 2. Prelude 3. Minuet 4. Waltz

07. Which of the following is a **definite pitch** instrument?

1. Tambourine 2. Glockenspiel 3. Side drum 4. Castanet

08. Which major scale has the following Key signature?



1. F Major 2. B^b Major
3. G Major 4. D Major

09. The 5th degree of a scale is

1. Tonic 2. Mediant 3. Sub dominant 4. Dominant

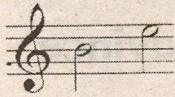
10. The English meaning of Crescendo is

1. Gradually becoming louder 2. Gradually becoming softer
3. Very loud 4. Very soft

11. A performance by 02 people is called a

1. Solo 2. Duet 3. Trio 4. Quartet

12. The given distance is



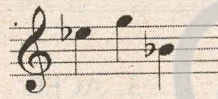

1. 4th 2. 3rd 3. 5th 4. 2nd

13. The given note is




1. C 2. D 3. G 4. E

14. Which of the following is correct



1. 2. 3. 4.

15. Which of the following is a 'melodic Interval'



1. 2. 3. 4.

16. Where do you mark the semitones in a Major scale

1. Between 1st - 2nd / 7th - 8th 2. Between 3rd - 4th / 7th - 8th
3. Between 3rd - 4th / 5th - 6th 4. Between 1st - 2nd / 3rd - 4th

17. Which of the following common Sri Lankan bird is the most musical

1. Barbert 2. Crow 3. Cuckoo 4. Magpie - Robin

18. Which of the following is an Example for old music

1. Eine Kleine Nacht musik 2. Pink panther 3. We are the world 4. Lion king

19. Which of the following is an example for Rounds

1. Sing a song of six pence 2. Row Row your boat 3. I'm sailing 4. Tramp Tramp

20. Which note is the highest from all



1. 2. 3. 4.


PART 11

Answer question no 1 and two others

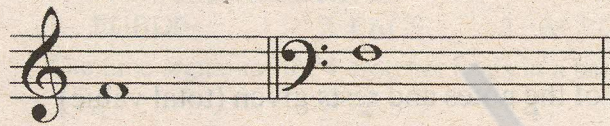
i. Name the following key signatures (2 marks)



ii. Add the correct time signature to each of the following(2marks)



iii. Write another note as asked. (1 mark)




5th above

3rd below

iv. Complete the following cages..(Grid) (2 marks)

Religious function	Religion	Song used
	Christians	Jingle bells
Deepavali	Buddhists	Bhajans

v. Write another note after the given note as required (2 marks)




Semitone higher

Semitone lower


vi. Write 02 lines of Baila or Viridu you learnt in the class (1 mark)

2.a. Write the following scales in semibreves and mark semitones (4 marks)


D major ascending, with key signatures



B flat major descending, with accidentals



b. Identify the notes on the staff and then name them with the corresponding numbers on the given key board (2 marks)



1.

2.

3.

4.

3

