



PROVINCIAL DEPARTMENT OF EDUCATION - NORTH WESTERN PROVINCE

Second Term Test 2018

Grade 06

GEOGRAPHY

Time : 2 hours

Name / Index No.

Part I

- Answer all the questions.

- Fill in the blanks using the suitable word from brackets for question No. 01 to 05.

- 01 helps to destroy insects that harm paddy fields. (Crow - Pheasant / Dragonfly / Crow)
- 02 is useful to identify the shape of the school ground. (Gage / Wall / Boundary)
- 03 When we write the name of the school, we write the name of the after the education zone. (District / Education Division / Education Office)
- 04 Domestic industries belong to the (Large scale industries / Small scale industries / medium scale industries)
- 05 Anuradhapura and belong to the North Central province. (Matale / Vavuniya / Polonnaruwa)

- If the following statements are correct put (✓) if not put (✗) for question No. 06 to 10.

- 06 Shape, distance and location of geographical features can be shown clearly in a map than in a picture. ()
- 07 Bat helps in the Pollination. ()
- 08 Province is the smallest administrative unit in Sri Lanka. ()
- 09 North west is located between West and North directions. ()
- 10 Beet root is a main crop cultivating in the hill country in Sri Lanka. ()

● **Underline the most suitable answer for question No. 11 to 15.**

- 11 A specific feature that can be seen in the sky before a rain is,
- (1) can be seen blue clouds. (2) can be seen light colour long clouds.
- (3) can be seen dark thick clouds. (4) clouds can not be seen
- 12 When you stand facing the rising sun, stretching your hands, your right hand points to the direction of the,
- (1) North (2) South (3) East (4) West
- 13 Rainfall is 100mm and temperature is 12⁰C in Nuwara Eliya district. The equipment that can be used to measure 100mm rainfall is,
- (1) Thermometer (2) Anemometer
- (3) Rainguage (4) Wind direction indicator
- 14 The man made feature among the following geographical features is,
- (1) Highlands (2) Parks (3) Forests (4) Lowlands
- 15 The crop that is abundantly grown in river valleys in Sri Lanka is,
- (1) Tea (2) Rubber (3) Coconut (4) Paddy

● **Match 'A' with 'B' and write the number of the correct answer in the given space for question No. 16 to 20.**

A

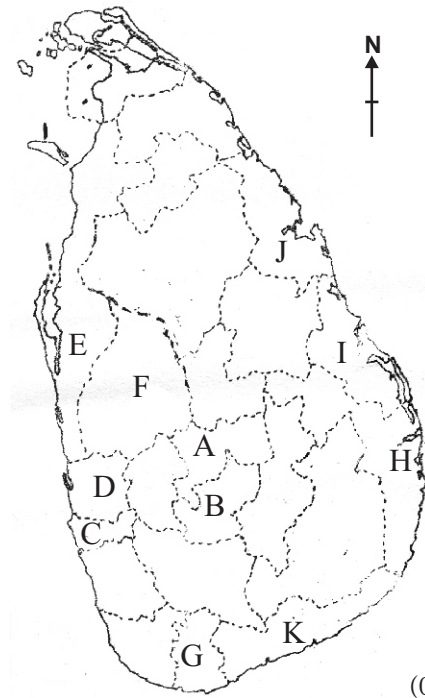
B

- | | | |
|--|---------|-----------------------------|
| 16 The gas that is essential to grow plants. | (.....) | 1. Millimeter |
| 17 It is bounded to Kurunegala district. | (.....) | 2. Parrot |
| 18 The unit that measure rainfall. | (.....) | 3. Nitrogen |
| 19 A bird that helps to clean the environment. | (.....) | 4. Crow |
| 20 It helps to know the direction of the wind. | (.....) | 5. Wind direction indicator |
| | | 6. Gampaha |
| | | 7. Colombo |
| | | 8. Anemometer |

• Answer 05 questions including the first question.

01 Answer the following question using the given map of Sri Lanka.

- Write the names of the districts which are located in the eastern coast named as I & J. (04m.)
- Write the letter of the smallest district in Sri Lanka and write the province of it. (04m.)
- Write the names of the districts in the Southern Province shown by letter G and K. (04m.)
- Write the district that your school is situated. (02m.)
- Write the province that has the highest number of districts. (02m.)

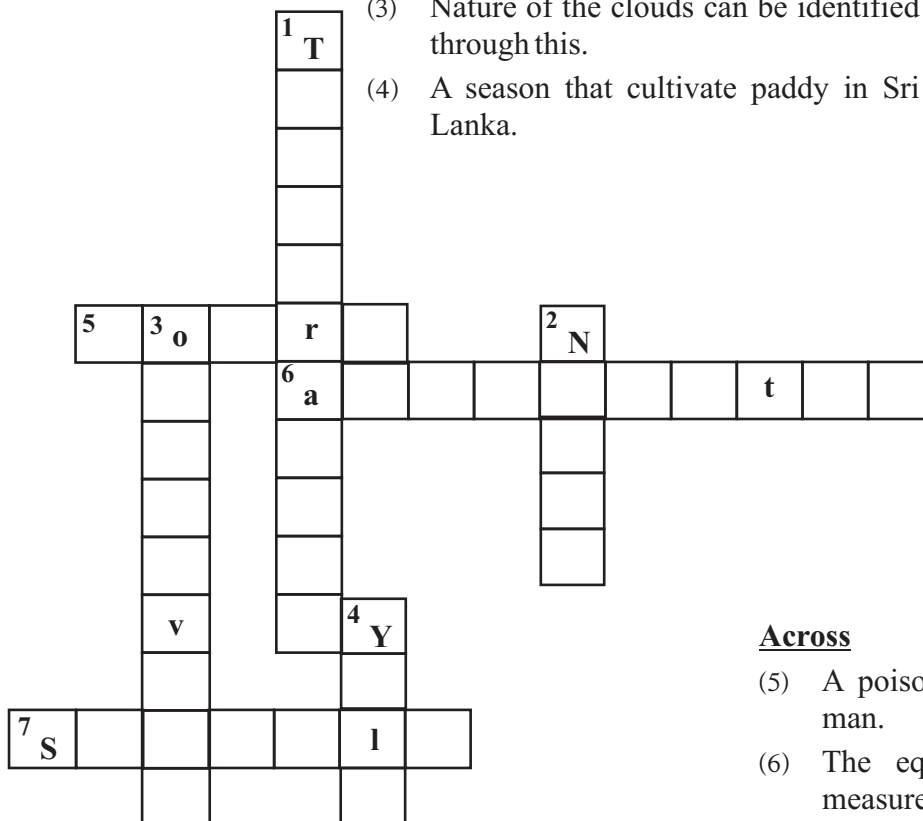


02 (i) Complete the puzzle.

(07m.)

Down

- An element of weather.
- The direction that can be identified using the compass.
- Nature of the clouds can be identified through this.
- A season that cultivate paddy in Sri Lanka.



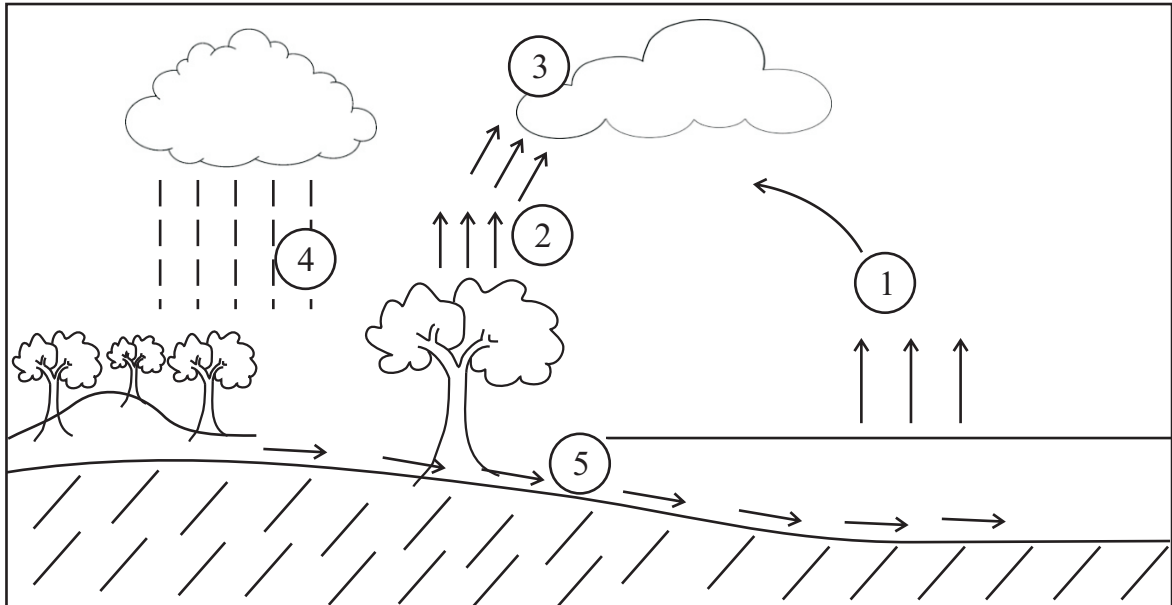
Across

- A poisonous reptile that harm the man.
- The equipment that is used to measure the speed of the wind.
- The main ethnic group in Sri Lanka.

(ii) Fill in the blanks

The Grama Niladhari Division is the smallest administrative unit in which the school is located. There can be several Grama Niladhari Divisions in a (i) A (ii) may constitute several Grama Niladhari Divisions. A (iii) constitutes a collection of those divisions. (iv) is the largest administrative unit in the country.


03



Answer the following question using the above picture.

- (i) What is the process mentioned above? (02m.)
- (ii) Name the processes shown by No. 1 & 2. (04m.)
- (iii) How clouds which are shown by No. 3 are created? (02m.)
- (iv) Name the process shown by No. 4. (02m.)
- (v) Write a use of the process shown by No. 4. (01m.)


04 Answer the questions using the given religious symbols.



A



B



C



D

- (i) Name the religions shown by letters A, B, C, D respectively. (04m.)
- (ii) Write one each festival related to the above mentioned religions. (04m.)
- (iii) Write 3 Societies that were established for the development of community in your area and write 01 each duty of them. (03m.)

05 Fill in the blanks of the given grid using the knowledge on traditional technological industries in Sri Lanka.

(i)

Industries	Area	District	Province
Cane products	1.	2.	Western Province
3.	Ambalangoda	Galle	4.
Mats	5.	Kandy	6.
7.	Moratuwa	Colombo	8.

(08m.)

- (ii) Name 3 industries that are done using the natural resources in your area. (03m.)

06 Following are agricultural lands and crops in various areas. Answer following questions using it.



A



B



C



D

- (i) Name two crops that are grown in the areas shown by A and C in Sri Lanka. (04m.)
- (ii) Write 2 each livelihoods of people who live in areas shown by letter B & D. (04m.)
- (iii) Write 2 industries that are done in the area shown by letter C. (03m.)

07 Using following services and answer the questions.



- (i) Write 04 services that are given free of charge by the government. (04m.)
- (ii) Write 02 services that are given cheaply by the government. (04m.)
- (iii) Write 03 duties that you have to do by obtaining above mentioned services. (03m.)

Answer Sheet - Part I

- (01) Dragonfly (02) Boundary (03) Education division (04) Small scale industries
 (05) Polonnaruwa (06) ✓ (07) ✗ (08) ✗ (09) ✓ (10) ✓ (11) 2
 (12) 2 (13) 3 (14) 2 (15) 4 (16) Nitrogen (17) Gampaha (18) Millimeter
 (19) Crow (20) Wind direction indicator (2 x 20 = 40 marks)

Part II

- 01 (i) B - Nuwara Eliya (04m.) (ii) C - Western province (04m.)
 (iii) G - Mathara K - Hambanthota (04m.)
 (iv) Give marks for the correct answer. (v) Northern Province (02m.)
- 02 (i) 1. Temperature 2. North 3. Observing 4. Yala 5. Cobra
 6. Anemometer 7. Sinhala (1 x 07 = 07 marks)
 (ii) 1. City 2. Divisional Secretariate Division 3. District 4. Province (04 marks)
- 03 (i) The process that happens rainfall. (02m.)
 (ii) 1. Inspiration 2. Transpiration (04m.)
 (iii) Condenses of water vapour (02m.)
 (iv) Precipitation (02m.)
 (v) to grow plants / less of dryness of the soil etc., (01m.)
- 04 (i) A - Buddhism B - Hindunism C - Cathalism D - Islam (04m.)
 (ii) A - Vesak, Poson etc., B - Thaipongal, Mahashiwa Rathree etc.,
 C - Christmas, Good Friday D - Ramazan, Hajji (04m.)
 (iii) Give marks for the correct answer. (03m.)
- 05 (i) (1) Radawadunna (2) Gampaha (3) Masks (4) Southern
 (5) Dumbara (6) Central (7) Furniture (8) Western (08m.)
 (ii) Mats, Pots, bricks etc., Give marks for the suitable answer. (03m.)
- 06 (i) give marks for the relavent answer. (04m.)
 (ii) give marks for the relavent answer. (04m.)
 (iii) give marks for the relavent answer. (03m.)
- 07 (i) Education, Health, defence, Postal (04m.)
 (ii) issue the season cards, supply medicine from Osusala etc., (04m.)
 (iii) Give marks for the relavent answer. (03m.)